

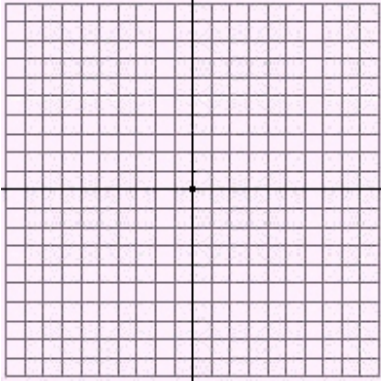
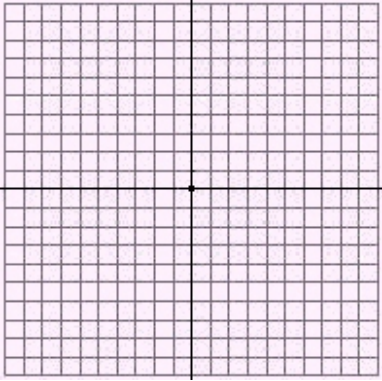
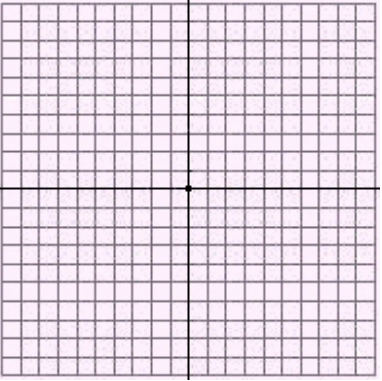
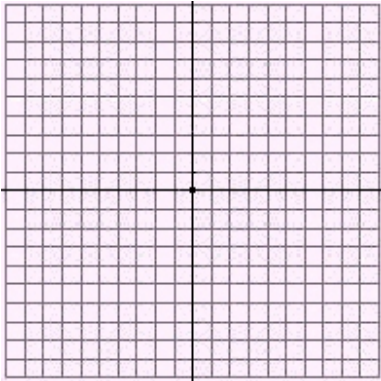
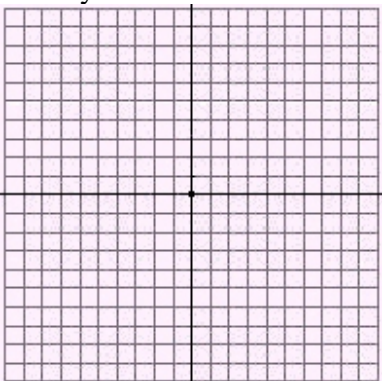
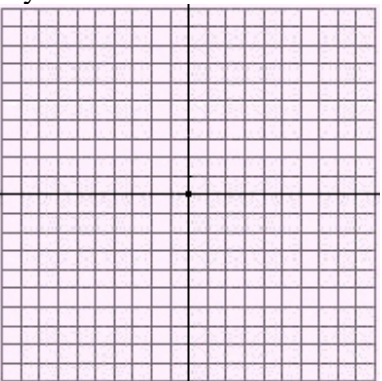
Name _____



Date _____

Linear Equations

Graph each equation.

| | | |
|---|--|---|
| <p>1. $-6x = 8 + 6y$</p>  | <p>2. $\frac{-4}{3} = 2y + 2x$</p>  | <p>3. $y = \frac{-7}{11}x - \frac{12}{11}$</p>  |
| <p>4. $y = -1$</p>  | <p>5. $5x + 7y = 12$</p>  | <p>6. $-3y = -4 - 4x$</p>  |