


Name : _____

Score : _____

Teacher : _____

Date : _____

Find the value of each group of base ten blocks.



= 100




= 10

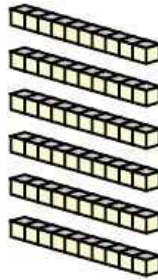


= 1

1)



_____ Hundreds




_____ Tens



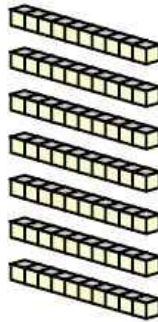
_____ Ones

_____ Total

2)



_____ Hundreds




_____ Tens



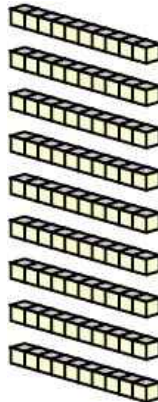
_____ Ones

_____ Total

3)



_____ Hundreds




_____ Tens




_____ Ones

_____ Total

4)



_____ Hundreds



_____ Tens



_____ Ones

_____ Total



Name : _____

Score : _____

Teacher : _____

Date : _____

Find the value of each group of base ten blocks.

1) 566

2) 379

3) 793

4) 134

