

Name : \_\_\_\_\_

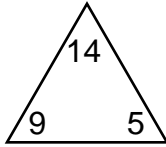
Score : \_\_\_\_\_

Teacher : \_\_\_\_\_

Date : \_\_\_\_\_

## Complete Each Family of Facts

1 )



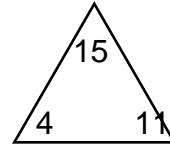
$$\square + \square = \square$$

$$\square + \square = \square$$

$$\square - \square = \square$$

$$\square - \square = \square$$

4 )



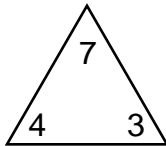
$$\square + \square = \square$$

$$\square + \square = \square$$

$$\square - \square = \square$$

$$\square - \square = \square$$

2 )



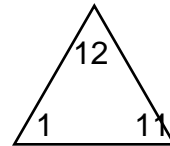
$$\square + \square = \square$$

$$\square + \square = \square$$

$$\square - \square = \square$$

$$\square - \square = \square$$

5 )



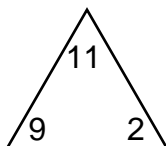
$$\square + \square = \square$$

$$\square + \square = \square$$

$$\square - \square = \square$$

$$\square - \square = \square$$

3 )



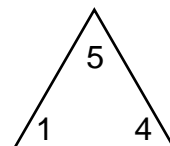
$$\square + \square = \square$$

$$\square + \square = \square$$

$$\square - \square = \square$$

$$\square - \square = \square$$

6 )



$$\square + \square = \square$$

$$\square + \square = \square$$

$$\square - \square = \square$$

$$\square - \square = \square$$

Name : \_\_\_\_\_

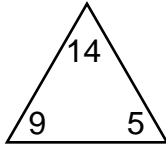
Score : \_\_\_\_\_

Teacher : \_\_\_\_\_

Date : \_\_\_\_\_

## Complete Each Family of Facts

1 )



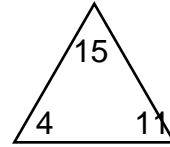
$$\boxed{9} + \boxed{5} = \boxed{14}$$

$$\boxed{5} + \boxed{9} = \boxed{14}$$

$$\boxed{14} - \boxed{5} = \boxed{9}$$

$$\boxed{14} - \boxed{9} = \boxed{5}$$

4 )



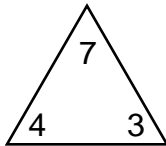
$$\boxed{4} + \boxed{11} = \boxed{15}$$

$$\boxed{11} + \boxed{4} = \boxed{15}$$

$$\boxed{15} - \boxed{11} = \boxed{4}$$

$$\boxed{15} - \boxed{4} = \boxed{11}$$

2 )



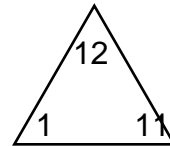
$$\boxed{4} + \boxed{3} = \boxed{7}$$

$$\boxed{3} + \boxed{4} = \boxed{7}$$

$$\boxed{7} - \boxed{3} = \boxed{4}$$

$$\boxed{7} - \boxed{4} = \boxed{3}$$

5 )



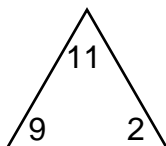
$$\boxed{1} + \boxed{11} = \boxed{12}$$

$$\boxed{11} + \boxed{1} = \boxed{12}$$

$$\boxed{12} - \boxed{11} = \boxed{1}$$

$$\boxed{12} - \boxed{1} = \boxed{11}$$

3 )



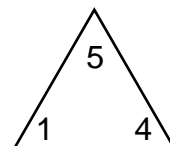
$$\boxed{9} + \boxed{2} = \boxed{11}$$

$$\boxed{2} + \boxed{9} = \boxed{11}$$

$$\boxed{11} - \boxed{2} = \boxed{9}$$

$$\boxed{11} - \boxed{9} = \boxed{2}$$

6 )



$$\boxed{1} + \boxed{4} = \boxed{5}$$

$$\boxed{4} + \boxed{1} = \boxed{5}$$

$$\boxed{5} - \boxed{4} = \boxed{1}$$

$$\boxed{5} - \boxed{1} = \boxed{4}$$