

Name : \_\_\_\_\_

Score : \_\_\_\_\_

Teacher : \_\_\_\_\_

Date : \_\_\_\_\_

## Graphing Inequalities

1)  $x \geq 1$



2)  $5 \geq s$



3)  $d < 9$



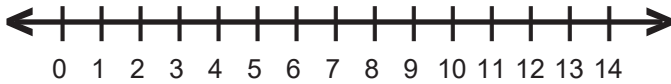
4)  $3 \leq v$



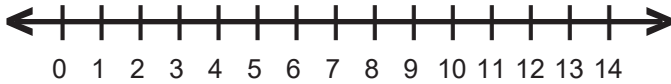
5)  $9 > a$



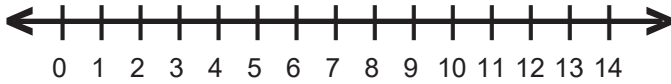
6)  $7 < n$



7)  $a \leq 9$



8)  $j \geq 3$



9)  $10 \leq k$



10)  $7 \geq f$



11)  $r < 11$



12)  $h \leq 2$



13)  $6 > z$



14)  $8 < s$



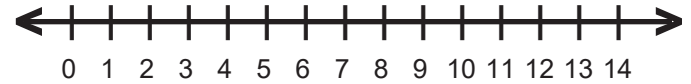
15)  $f > 12$



16)  $z > 8$



17)  $z < 8$



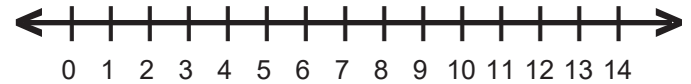
18)  $n \leq 8$



19)  $8 \geq z$



20)  $11 > v$



Name : \_\_\_\_\_

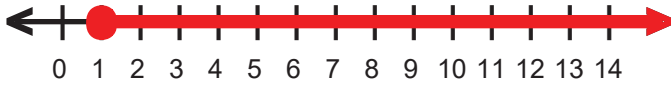
Score : \_\_\_\_\_

Teacher : \_\_\_\_\_

Date : \_\_\_\_\_

## Graphing Inequalities

1)  $x \geq 1$



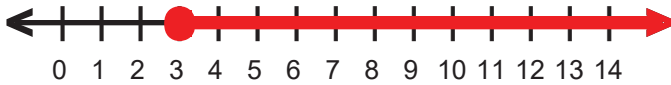
2)  $5 \geq s$



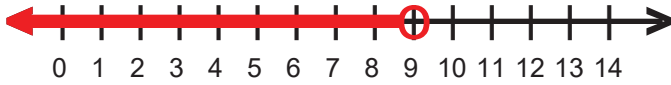
3)  $d < 9$



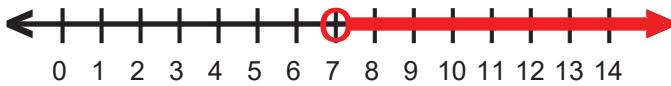
4)  $3 \leq v$



5)  $9 > a$



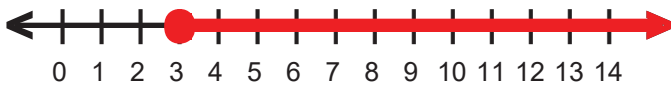
6)  $7 < n$



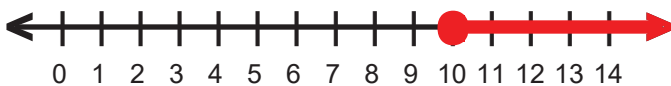
7)  $a \leq 9$



8)  $j \geq 3$



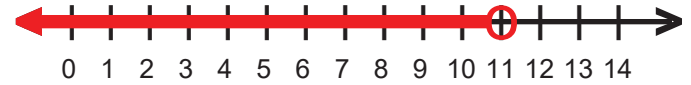
9)  $10 \leq k$



10)  $7 \geq f$



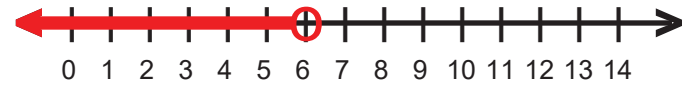
11)  $r < 11$



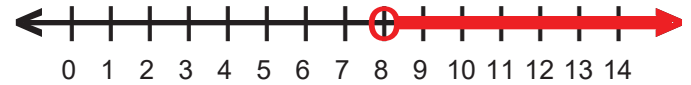
12)  $h \leq 2$



13)  $6 > z$



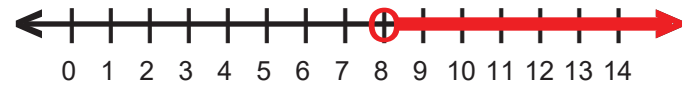
14)  $8 < s$



15)  $f > 12$



16)  $z > 8$



17)  $z < 8$



18)  $n \leq 8$



19)  $8 \geq z$



20)  $11 > v$

