

Name : _____

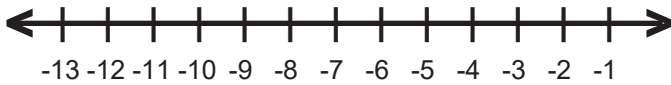
Score : _____

Teacher : _____

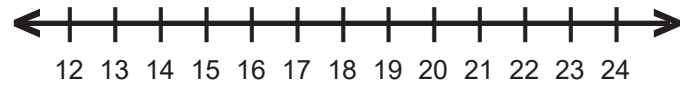
Date : _____

Solve and Graph the Inequalities

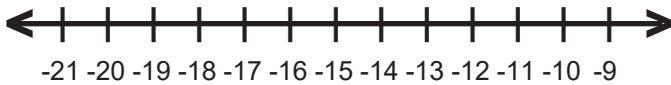
1) $-7 + v \geq -18$



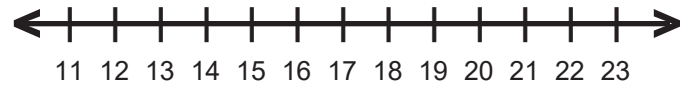
6) $17 < 2 + n$



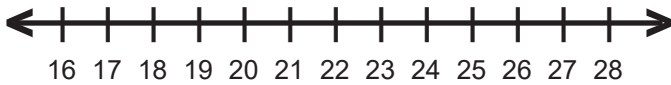
2) $-9 \leq j + 5$



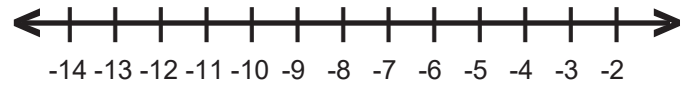
7) $p - 7 > 6$



3) $-9 + z > 16$



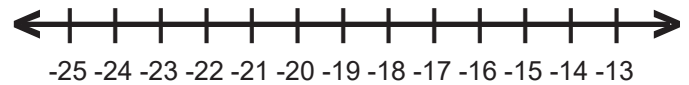
8) $-14 > -2 + x$



4) $-6 \geq c - 8$



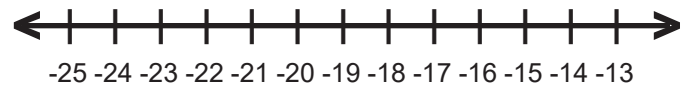
9) $5 + k < -16$



5) $5 \leq -4 + y$



10) $-14 \geq g + 3$



Name : _____

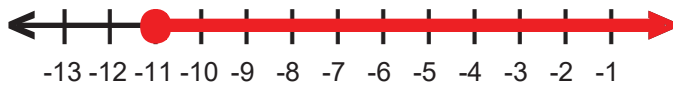
Score : _____

Teacher : _____

Date : _____

Solve and Graph the Inequalities

1) $v \geq -11$



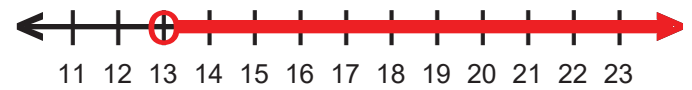
6) $n \geq 15$



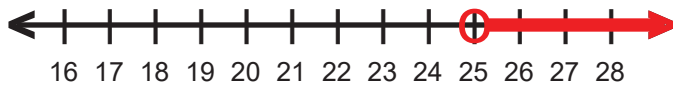
2) $j \geq -14$



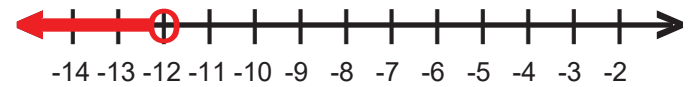
7) $p \geq 13$



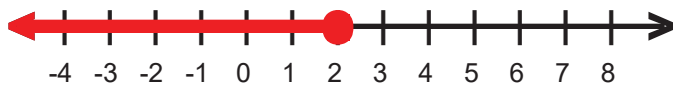
3) $z \geq 25$



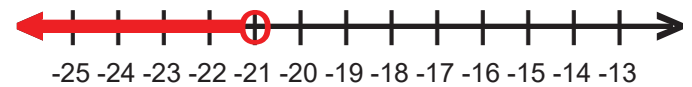
8) $x \leq -12$



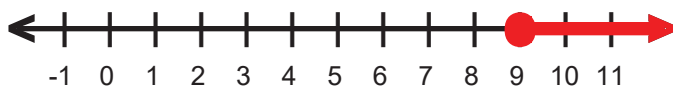
4) $c \leq 2$



9) $k \leq -21$



5) $y \geq 9$



10) $g \leq -17$

