

Name : _____

Score : _____

Teacher : _____

Date : _____

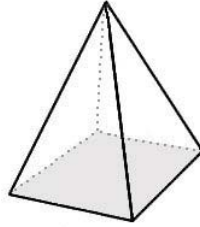
Identify Each Solid Figure.

1)



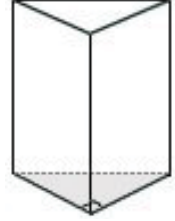
Type: _____

2)



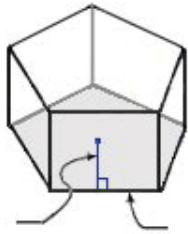
Type: _____

3)



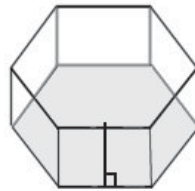
Type: _____

4)



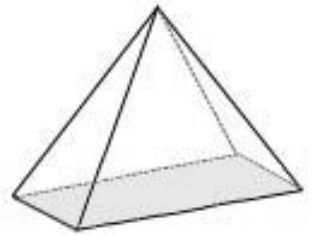
Type: _____

5)



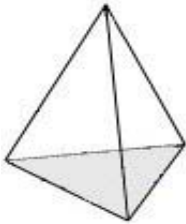
Type: _____

6)



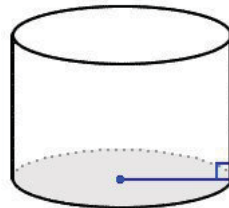
Type: _____

7)



Type: _____

8)



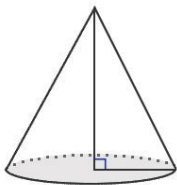
Type: _____

9)



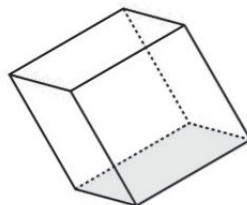
Type: _____

10)




Type: _____

11)



Type: _____

12)



Type: _____



Name : _____

Score : _____

Teacher : _____

Date : _____

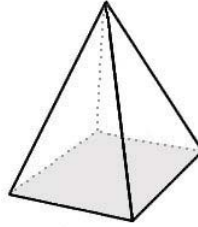
Identify Each Solid Figure.

1)



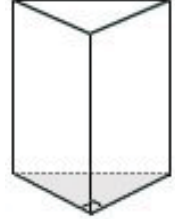
Type: Pentagonal Pyramid

2)



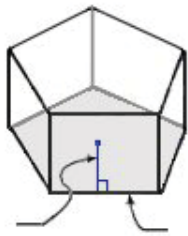
Type: Square Pyramid

3)



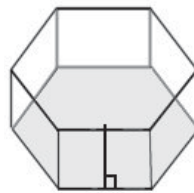
Type: Triangular Prism

4)



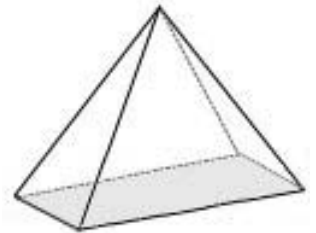
Type: Pentagonal Prism

5)



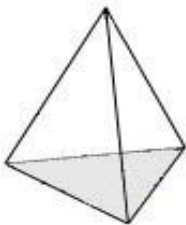
Type: Hexagonal Prism

6)



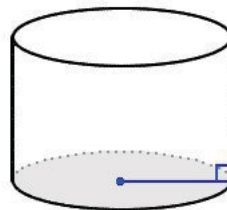
Type: Rectangular Pyramid

7)



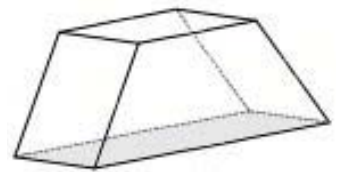
Type: Triangular Pyramid

8)



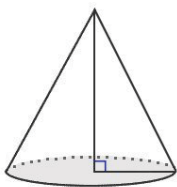
Type: Cylinder

9)



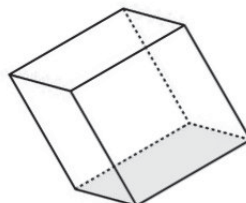
Type: Trapezoidal Prism

10)



Type: Cone

11)



Type: Square Prism (Cube)

12)



Type: Rectangular Prism

