

Name : _____

Score : _____

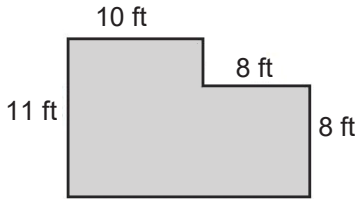
Teacher : _____

Date : _____

Compound Shapes

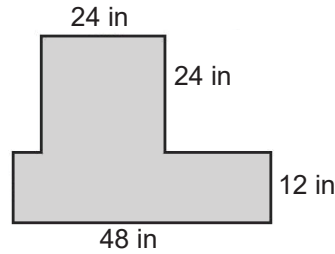
Find the area of each figure, round your answer to one decimal place if necessary.

1)



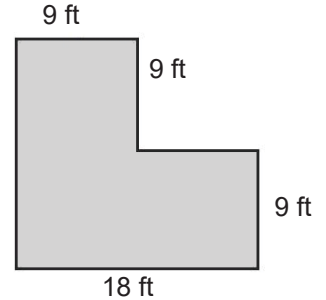
Area: _____

2)



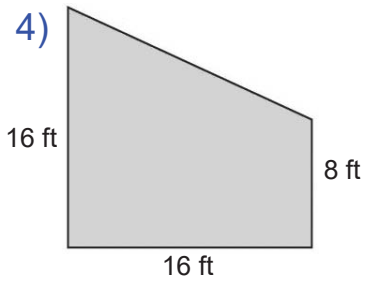
Area: _____

3)



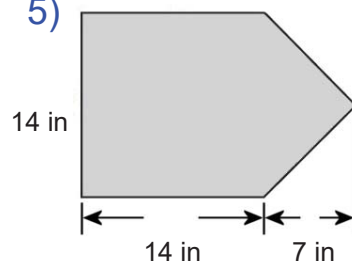
Area: _____

4)



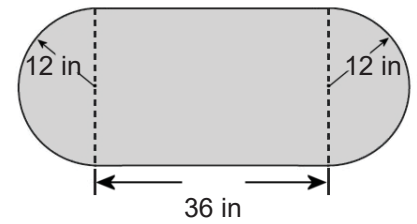
Area: _____

5)



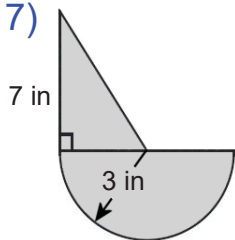
Area: _____

6)



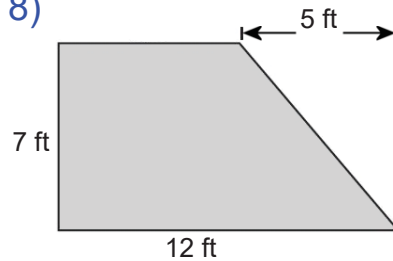
Area: _____

7)



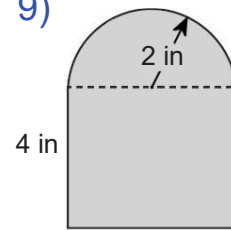
Area: _____

8)



Area: _____

9)



Area: _____

Name : _____

Score : _____

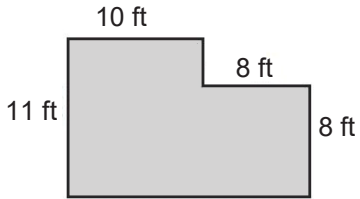
Teacher : _____

Date : _____

Compound Shapes

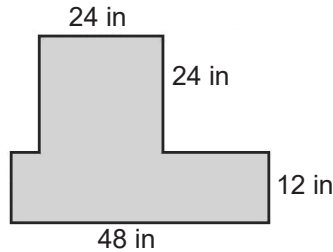
Find the area of each figure, round your answer to one decimal place if necessary.

1)



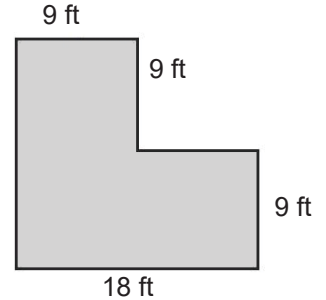
Area: 174 ft²

2)



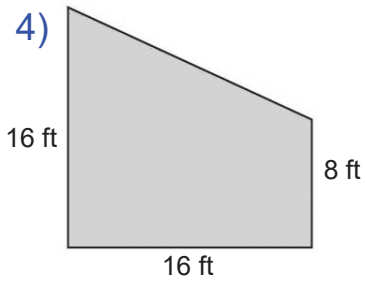
Area: 1152 in²

3)



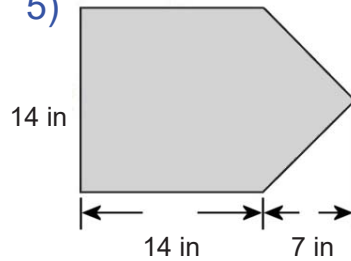
Area: 243 ft²

4)



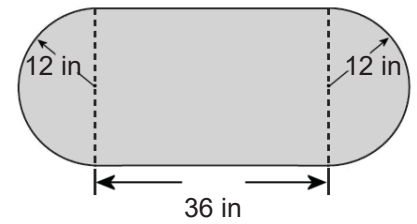
Area: 192 ft²

5)



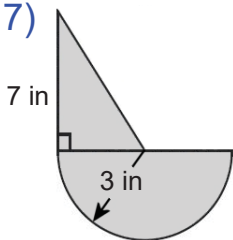
Area: 245 in²

6)



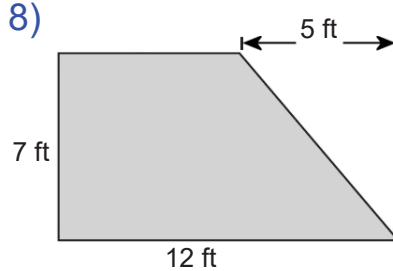
Area: 1316.4 in²

7)



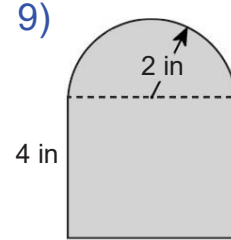
Area: 24.6 in²

8)



Area: 66.5 ft²

9)



Area: 22.3 in²