

Name : \_\_\_\_\_

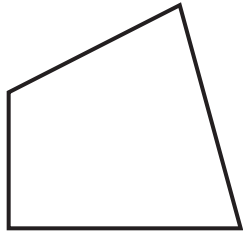
Score : \_\_\_\_\_

Teacher : \_\_\_\_\_

Date : \_\_\_\_\_

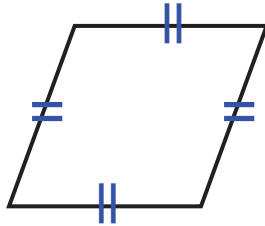
**Identify the Type For Each Quadrilateral.**

1)



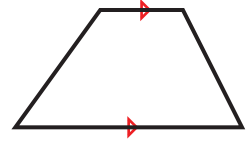
Type: \_\_\_\_\_

2)



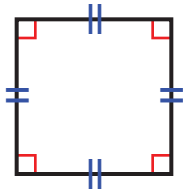
Type: \_\_\_\_\_

3)



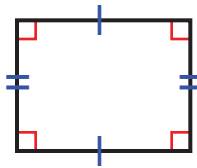
Type: \_\_\_\_\_

4)



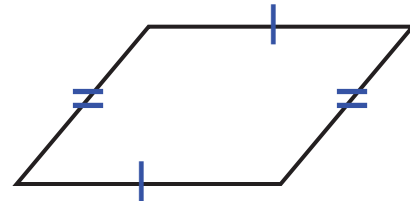
Type: \_\_\_\_\_

5)



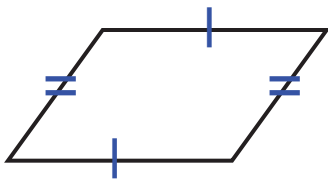
Type: \_\_\_\_\_

6)



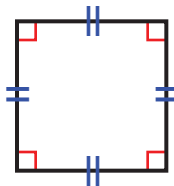
Type: \_\_\_\_\_

7)



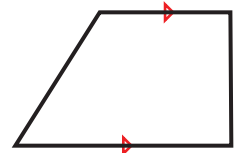
Type: \_\_\_\_\_

8)



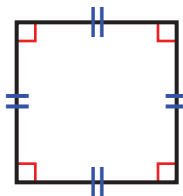
Type: \_\_\_\_\_

9)



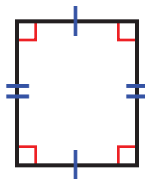
Type: \_\_\_\_\_

10)



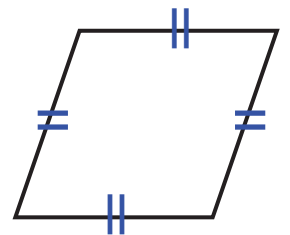
Type: \_\_\_\_\_

11)



Type: \_\_\_\_\_

12)



Type: \_\_\_\_\_



Name : \_\_\_\_\_

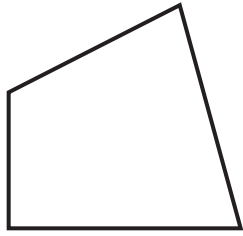
Score : \_\_\_\_\_

Teacher : \_\_\_\_\_

Date : \_\_\_\_\_

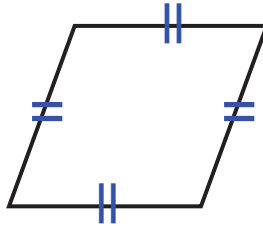
**Identify the Type For Each Quadrilateral.**

1)



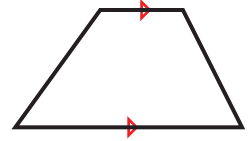
Type: Quadrilateral

2)



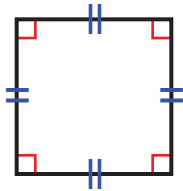
Type: Rhombus

3)



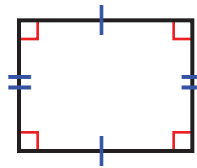
Type: Trapezoid

4)



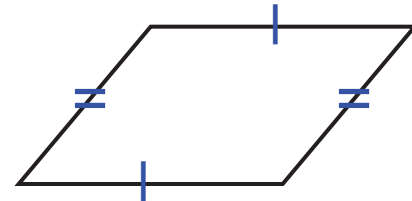
Type: Square

5)



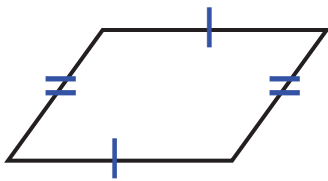
Type: Rectangle

6)



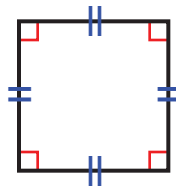
Type: Parallelogram

7)



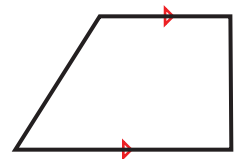
Type: Parallelogram

8)



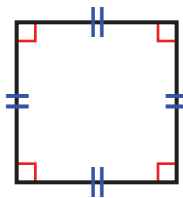
Type: Square

9)



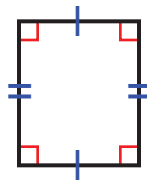
Type: Trapezoid

10)



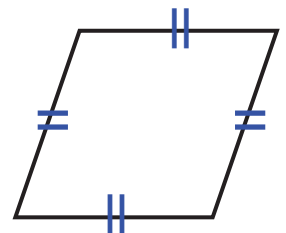
Type: Square

11)



Type: Rectangle

12)



Type: Rhombus

