

Name : _____

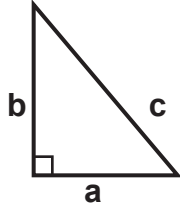
Score : _____

Teacher : _____

Date : _____

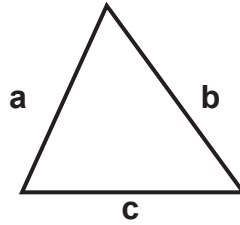
Identify the Type For Each Triangle

1)



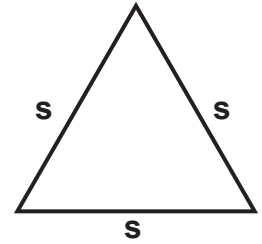
Type: _____

2)



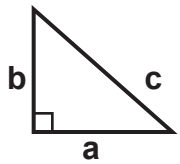
Type: _____

3)



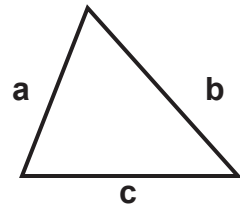
Type: _____

4)



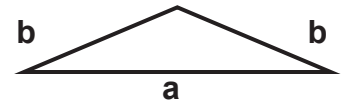
Type: _____

5)



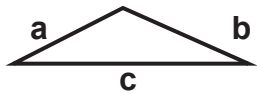
Type: _____

6)



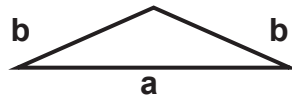
Type: _____

7)



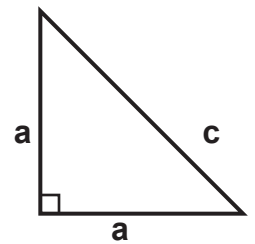
Type: _____

8)



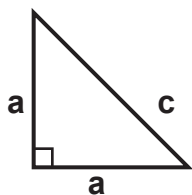
Type: _____

9)



Type: _____

10)



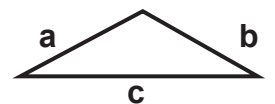
Type: _____

11)



Type: _____

12)



Type: _____



Name : _____

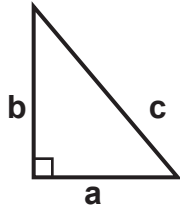
Score : _____

Teacher : _____

Date : _____

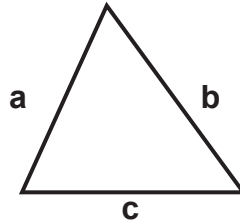
Identify the Type For Each Triangle

1)



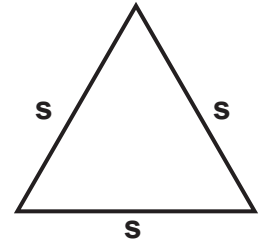
Type: Right Scalene

2)



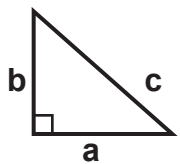
Type: Acute Scalene

3)



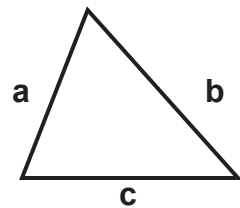
Type: Equilateral

4)



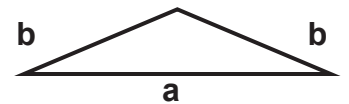
Type: Right Scalene

5)



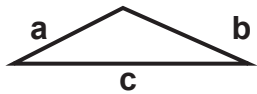
Type: Acute Scalene

6)



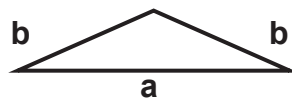
Type: Obtuse Isosceles

7)



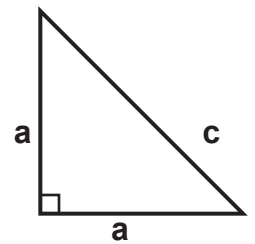
Type: Obtuse Scalene

8)



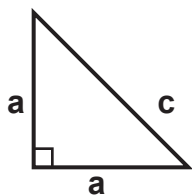
Type: Obtuse Isosceles

9)



Type: Right Isosceles

10)



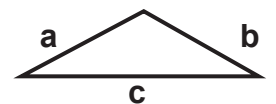
Type: Right Isosceles

11)



Type: Equilateral

12)



Type: Obtuse Scalene

