

Name : \_\_\_\_\_

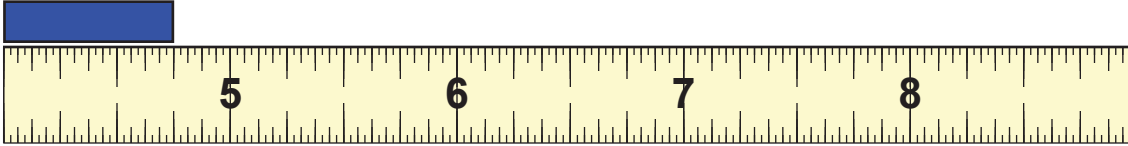
Score : \_\_\_\_\_

Teacher : \_\_\_\_\_

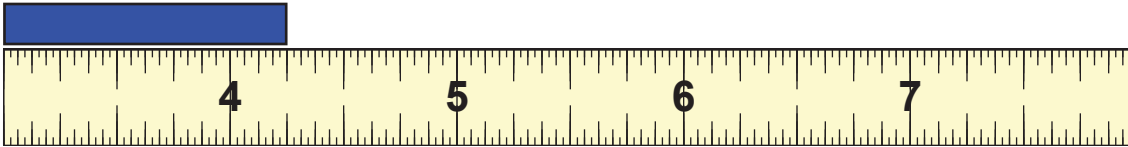
Date : \_\_\_\_\_

## Reading a Standard Ruler

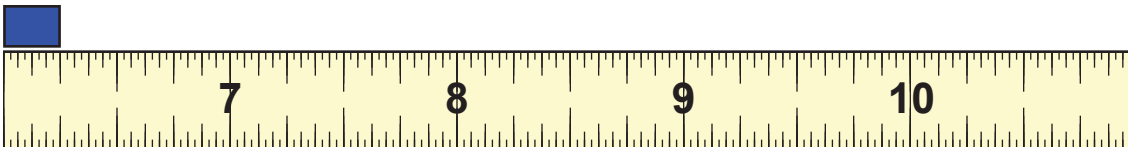
How many Inches ?



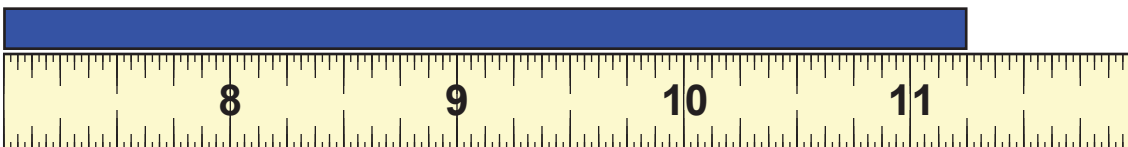
\_\_\_\_\_



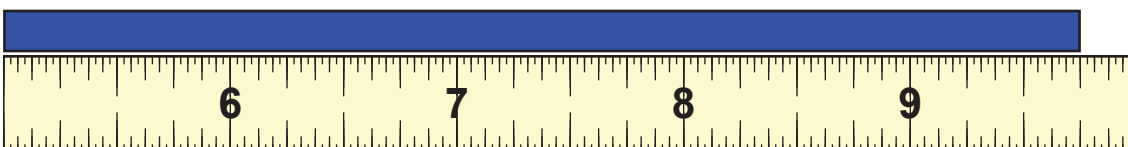
\_\_\_\_\_



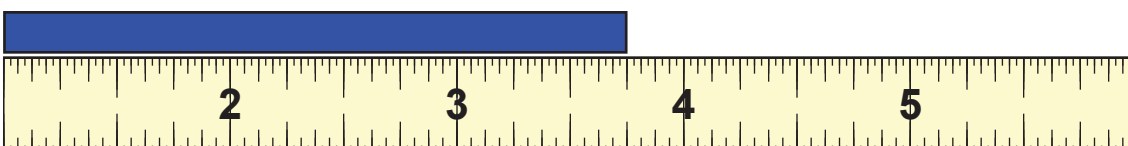
\_\_\_\_\_



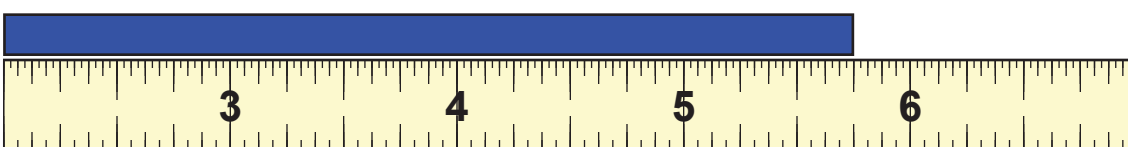
\_\_\_\_\_



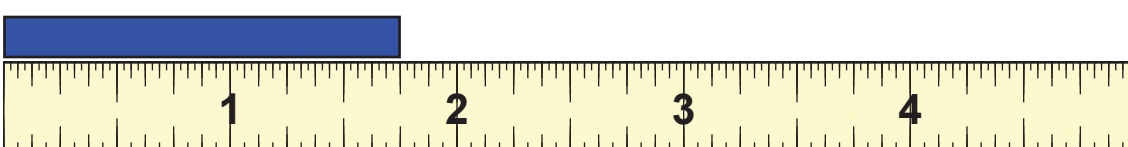
\_\_\_\_\_



\_\_\_\_\_



\_\_\_\_\_



\_\_\_\_\_



Name : \_\_\_\_\_

Score : \_\_\_\_\_

Teacher : \_\_\_\_\_

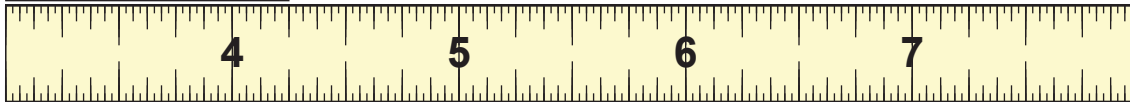
Date : \_\_\_\_\_

## Reading a Standard Ruler



How many Inches ?

\_\_\_\_\_  $4 \frac{3}{4}$  in



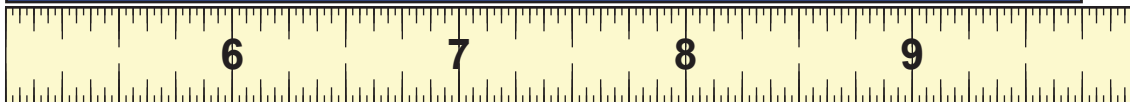
\_\_\_\_\_  $4 \frac{1}{4}$  in



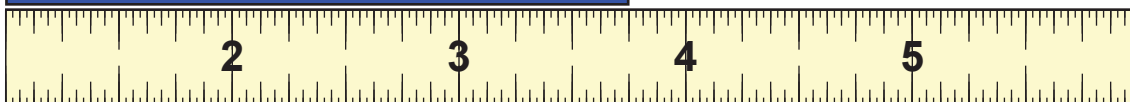
\_\_\_\_\_  $6 \frac{1}{4}$  in



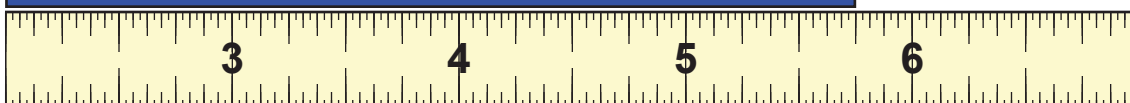
\_\_\_\_\_  $11 \frac{1}{4}$  in



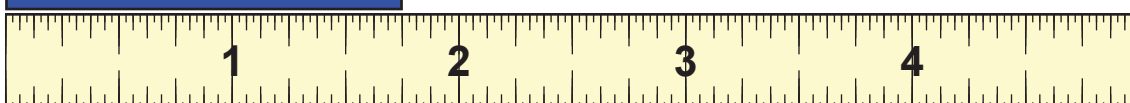
\_\_\_\_\_  $9 \frac{3}{4}$  in



\_\_\_\_\_  $3 \frac{3}{4}$  in



\_\_\_\_\_  $5 \frac{3}{4}$  in



\_\_\_\_\_  $1 \frac{3}{4}$  in

