

Name : _____

Score : _____

Teacher : _____

Date : _____

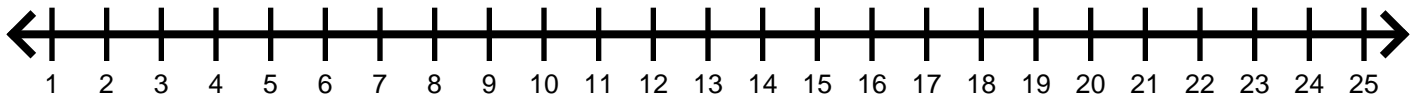
Box and Whisker Word Problems

- 1) First National Bank recorded the number of transactions over 11 randomly selected days. Using the data below, write out the five number summary and make a box and whisker plot.

13, 9, 20, 21, 15, 24, 17, 4, 12, 16, 8

Minimum: _____ Maximum: _____

Q_1 : _____ Q_2 : _____ Q_3 : _____

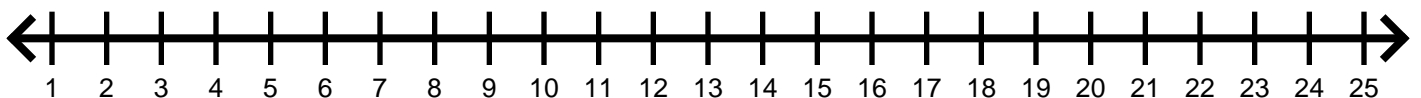


- 2) A grocery store logged how many pounds of kiwis it sold over 9 days. Using the data below, write out the five number summary and make a box and whisker plot.

8, 6, 22, 24, 7, 19, 5, 3, 23

Minimum: _____ Maximum: _____

Q_1 : _____ Q_2 : _____ Q_3 : _____



Name : _____

Score : _____

Teacher : _____

Date : _____

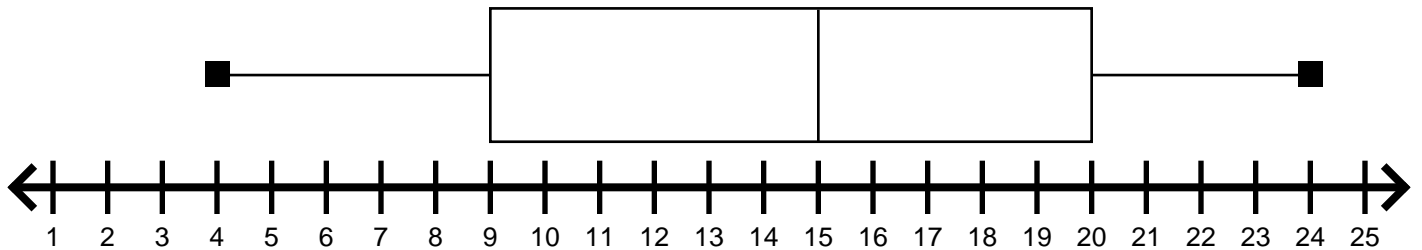
Box and Whisker Word Problems

- 1) First National Bank recorded the number of transactions over 11 randomly selected days. Using the data below, write out the five number summary and make a box and whisker plot.

13, 9, 20, 21, 15, 24, 17, 4, 12, 16, 8

Minimum: 4 Maximum: 24

Q_1 : 9 Q_2 : 15 Q_3 : 20



- 2) A grocery store logged how many pounds of kiwis it sold over 9 days. Using the data below, write out the five number summary and make a box and whisker plot.

8, 6, 22, 24, 7, 19, 5, 3, 23

Minimum: 3 Maximum: 24

Q_1 : 5.5 Q_2 : 8 Q_3 : 22.5

