

Name : _____

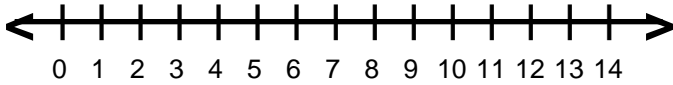
Score : _____

Teacher : _____

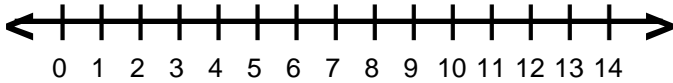
Date : _____

Graphing Inequalities

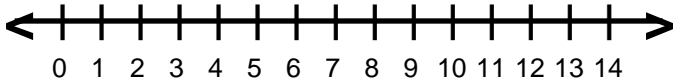
1) $y \leq 10$



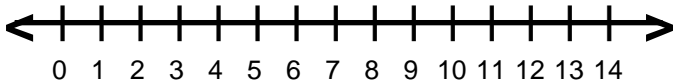
2) $z \leq 3$



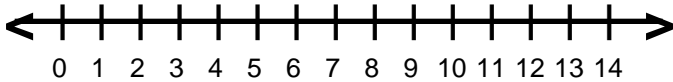
3) $w \leq 6$



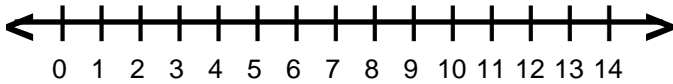
4) $f \leq 6$



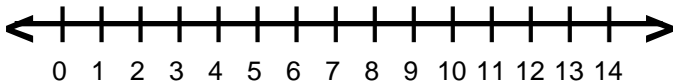
5) $7 > s$



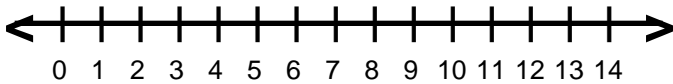
6) $4 \geq a$



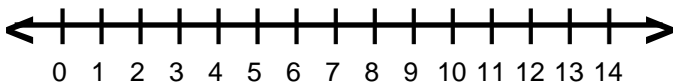
7) $9 > r$



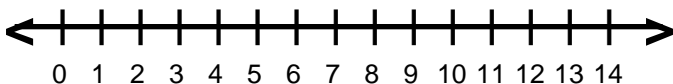
8) $7 > d$



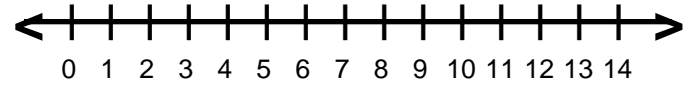
9) $k \geq 6$



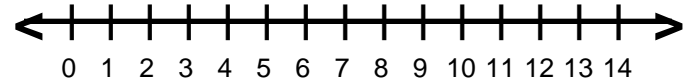
10) $z > 4$



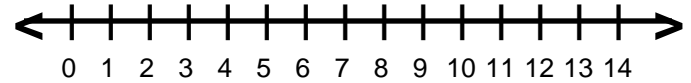
11) $s < 6$



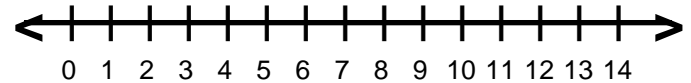
12) $4 < d$



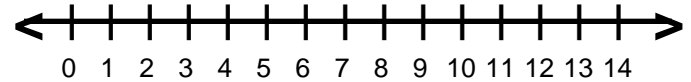
13) $5 < m$



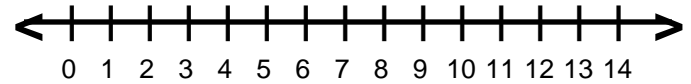
14) $h < 3$



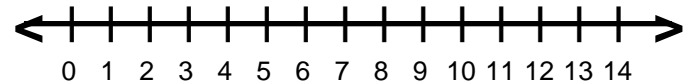
15) $5 \geq x$



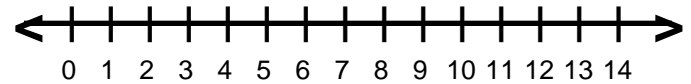
16) $d \geq 11$



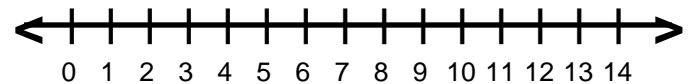
17) $1 > r$



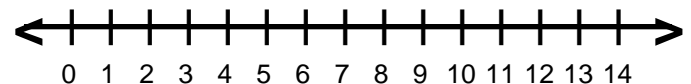
18) $10 \leq s$



19) $a < 2$



20) $4 \geq a$



Name : _____

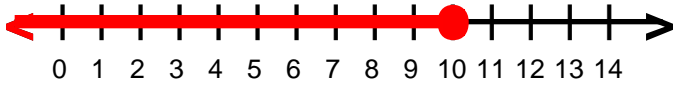
Score : _____

Teacher : _____

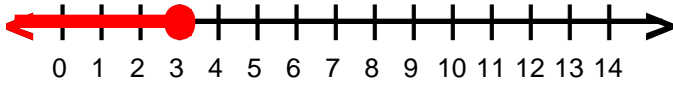
Date : _____

Graphing Inequalities

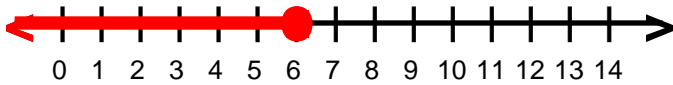
1) $y \leq 10$



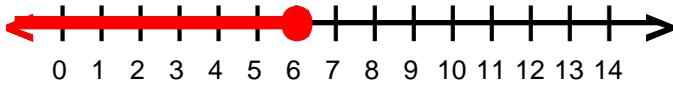
2) $z \leq 3$



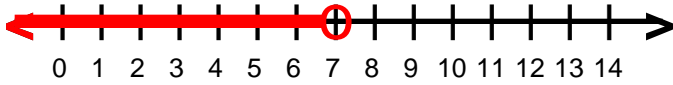
3) $w \leq 6$



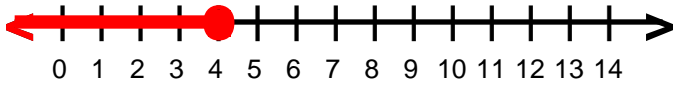
4) $f \leq 6$



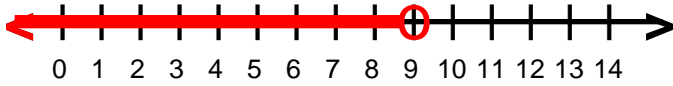
5) $7 > s$



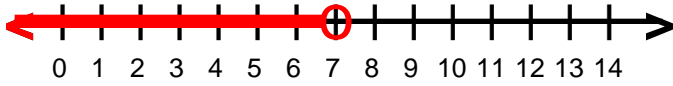
6) $4 \geq a$



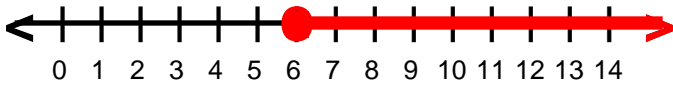
7) $9 > r$



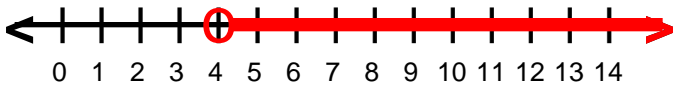
8) $7 > d$



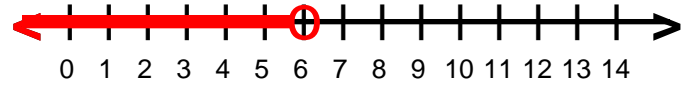
9) $k \geq 6$



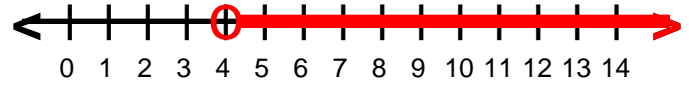
10) $z > 4$



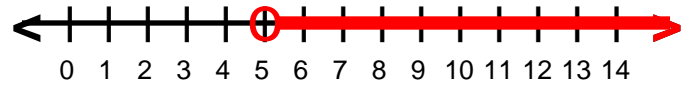
11) $s < 6$



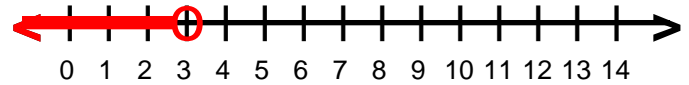
12) $4 < d$



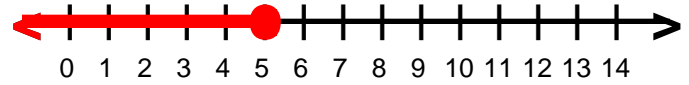
13) $5 < m$



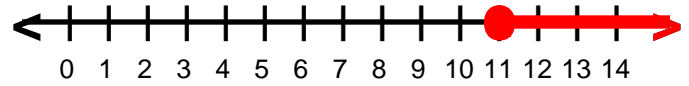
14) $h < 3$



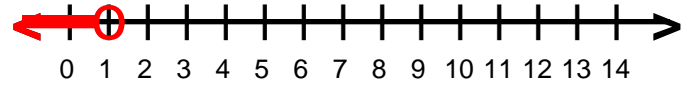
15) $5 \geq x$



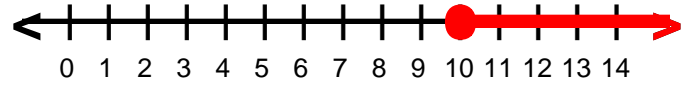
16) $d \geq 11$



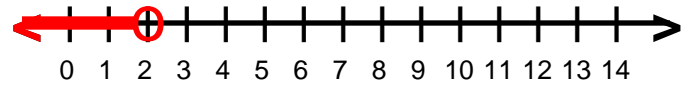
17) $1 > r$



18) $10 \leq s$



19) $a < 2$



20) $4 \geq a$

