

Name : _____

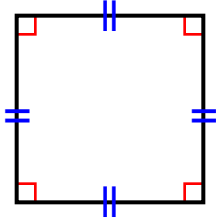
Score : _____

Teacher : _____

Date : _____

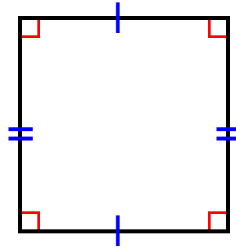
Identify the Type For Each Quadrilateral.

1)



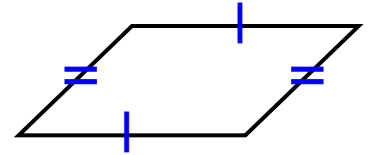
Type: _____

2)



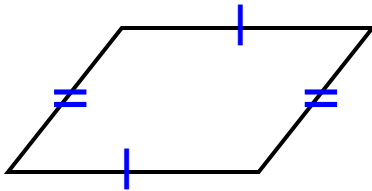
Type: _____

3)



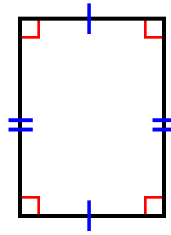
Type: _____

4)



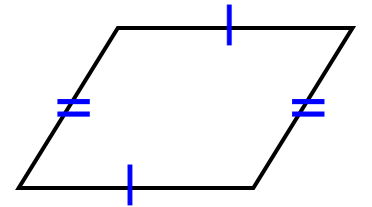
Type: _____

5)



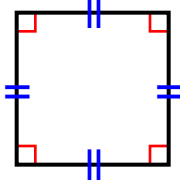
Type: _____

6)



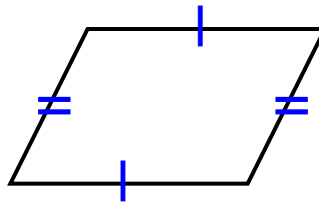
Type: _____

7)



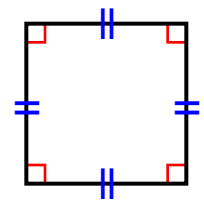
Type: _____

8)



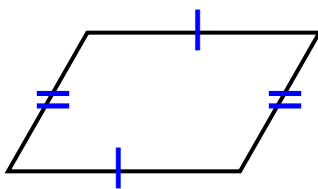
Type: _____

9)



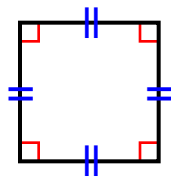
Type: _____

10)



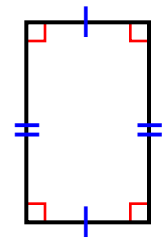
Type: _____

11)



Type: _____

12)



Type: _____



Name : _____

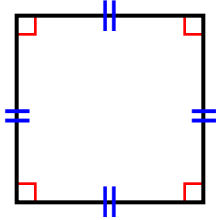
Score : _____

Teacher : _____

Date : _____

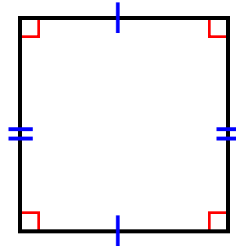
Identify the Type For Each Quadrilateral.

1)



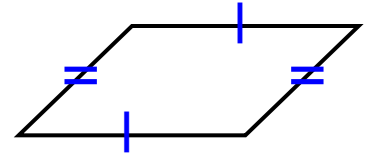
Type: Square

2)



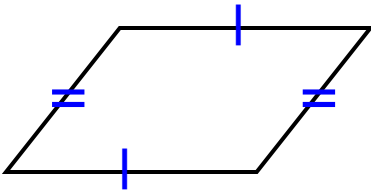
Type: Rectangle

3)



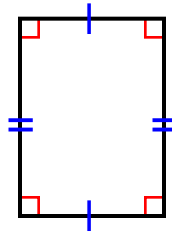
Type: Parallelogram

4)



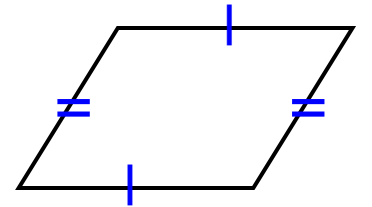
Type: Parallelogram

5)



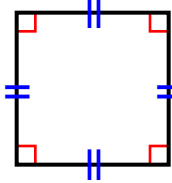
Type: Rectangle

6)



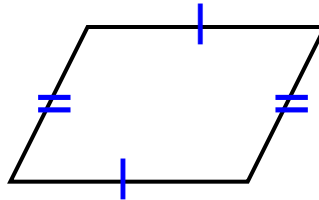
Type: Parallelogram

7)



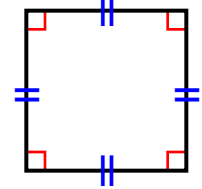
Type: Square

8)



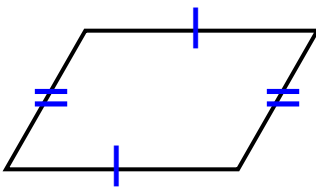
Type: Parallelogram

9)



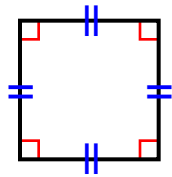
Type: Square

10)



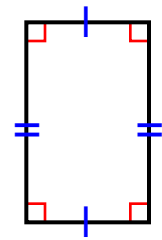
Type: Parallelogram

11)



Type: Square

12)



Type: Rectangle

