

Name \_\_\_\_\_



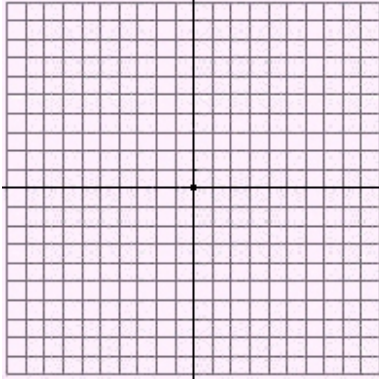
Date \_\_\_\_\_

## Linear Inequalities

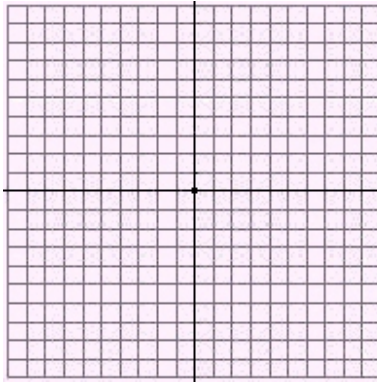
Sketch the graph of the inequality.

Enter answers  
in text boxes.

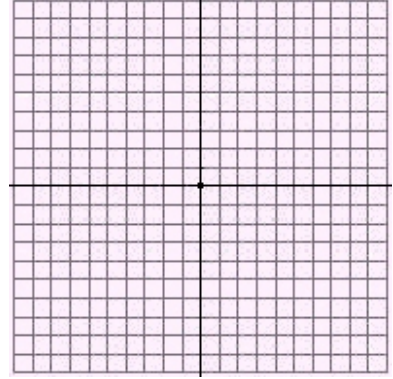
1.  $-2x \leq 7 + y$



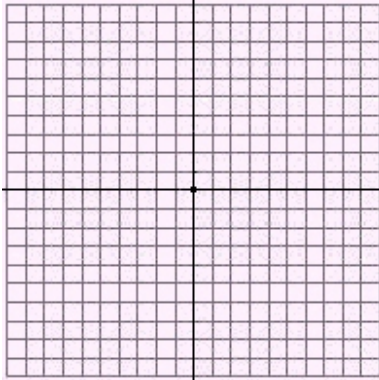
2.  $y > -4$



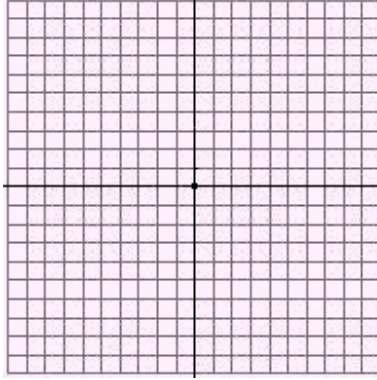
3.  $x - y \geq 6$



4.  $2y \leq 16 + 2x$



5.  $x - y < -6$



6.  $y > x + 5$

