

Name _____































Date _____

Points, Lines, Rays, and Line Segments

Enter answers
in text boxes.

Name each figure using letters and symbols.

1. 	2. 	3. $\bullet V$
4. 	5. 	6. 
7. 	8. 	9. $\bullet L$
10. 	11. 	12. 
13. 	14. 	15. 
16. 	17. 	18. 
19. 	20. $\bullet R$	21. 
22. $\bullet J$	23. 	24. 
25. 	26. 	27. 
28. 	29. 	30. 
31. 	32. 	33. $\bullet Y$