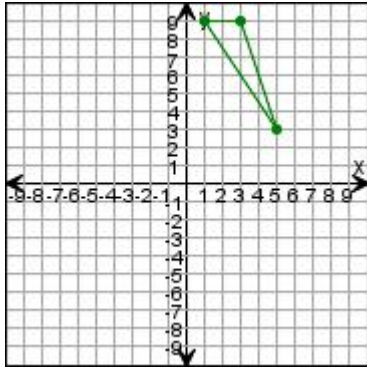


Name _____

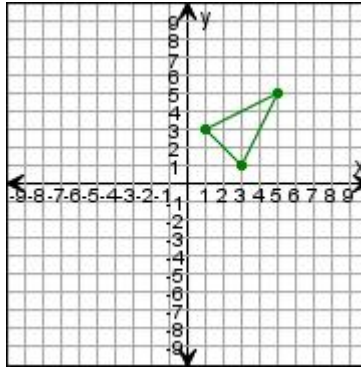
Transformations

Draw the triangle after the transformations. Enter the coordinates for the transformed triangles at the bottom of the document.

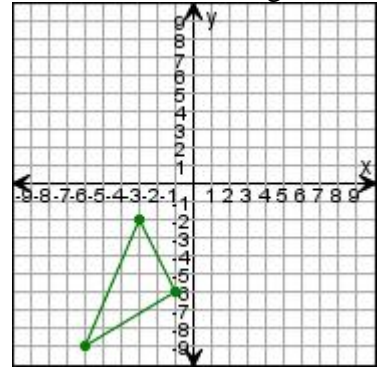
1. Translate the triangle 1 unit left.



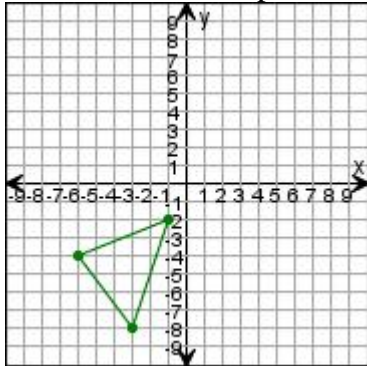
2. Translate the triangle down 4 units, then 3 units left.



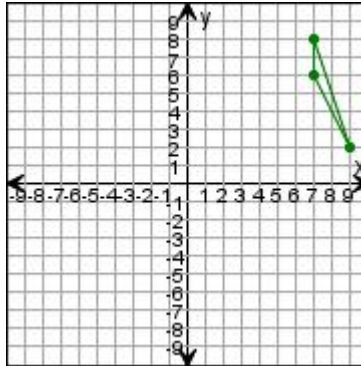
3. Translate the triangle up 2 units, then 4 units right.



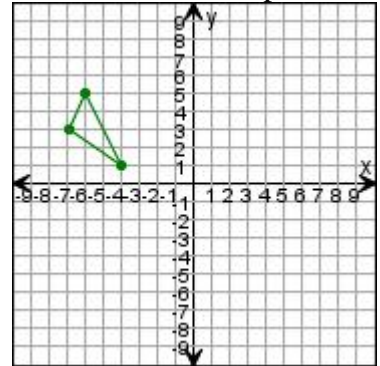
4. Translate the triangle right 2 units, then 9 units up.



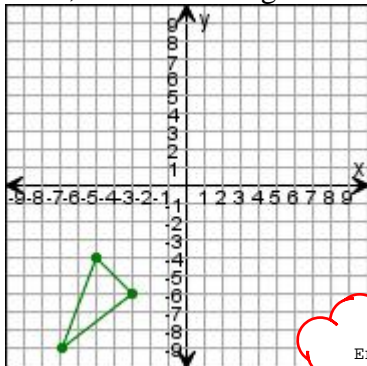
5. Translate the triangle left 9 units, then 7 units down.



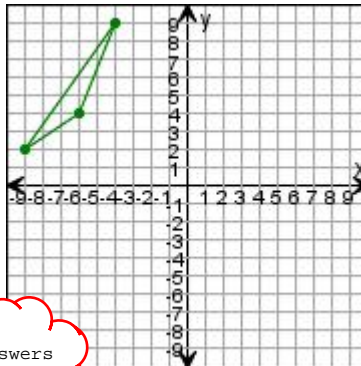
6. Translate the triangle right 4 units, then 2 units up.



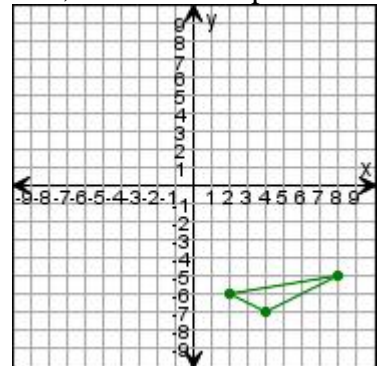
7. Translate the triangle up 9 units, then 3 units right.



8. Translate the triangle 6 units down.



9. Translate the triangle left 1 unit, then 2 units up.



Enter answers
in text boxes.