



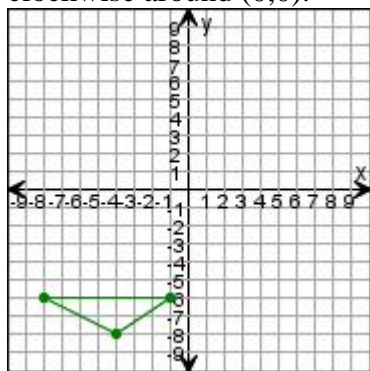
Date _____

Name _____

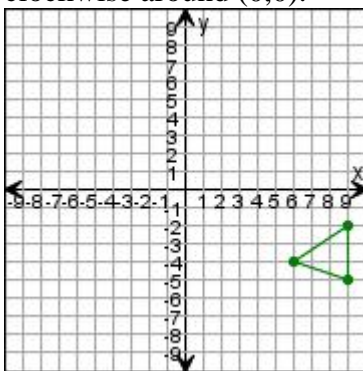
Transformations

Draw the triangle after the transformations. Enter the coordinates for the transformed triangles at the bottom of the document.

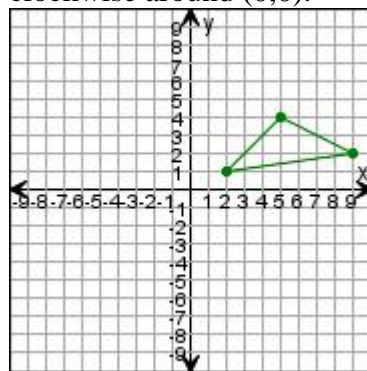
1. Rotate the triangle 270° clockwise around $(0,0)$.



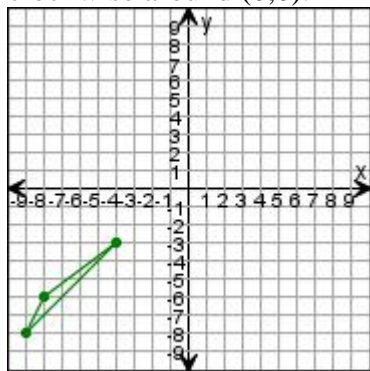
2. Rotate the triangle 180° clockwise around $(0,0)$.



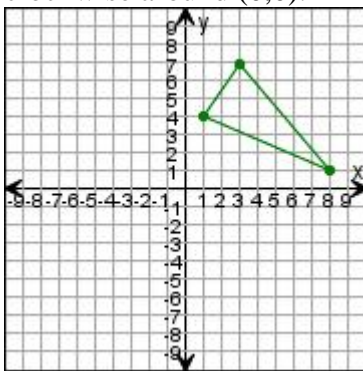
3. Rotate the triangle 90° clockwise around $(0,0)$.



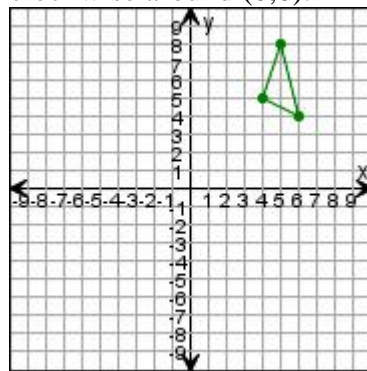
4. Rotate the triangle 90° clockwise around $(0,0)$.



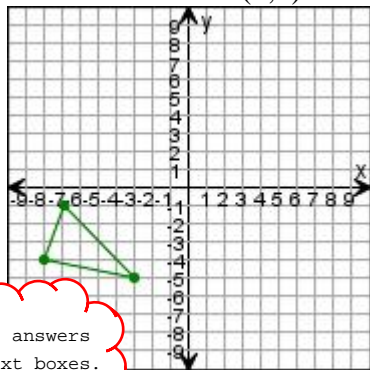
5. Rotate the triangle 270° clockwise around $(0,0)$.



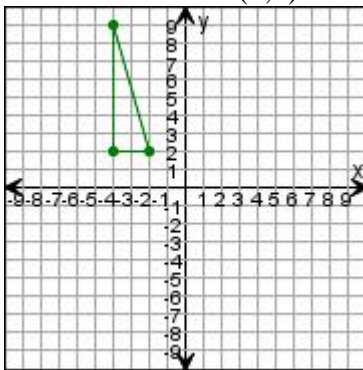
6. Rotate the triangle 180° clockwise around $(0,0)$.



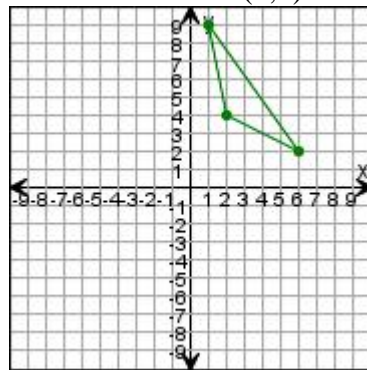
7. Rotate the triangle 270° clockwise around $(0,0)$.



8. Rotate the triangle 90° clockwise around $(0,0)$.



9. Rotate the triangle 270° clockwise around $(0,0)$.



Enter answers
in text boxes.