

Name _____



Date _____

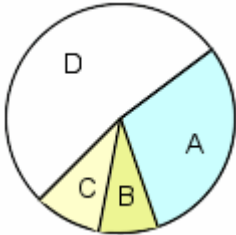
Circle Graphs

Enter answers in text boxes.

Complete.

1.

Animals at an Aquarium



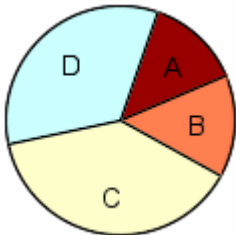
- A Sea horses 29%
- B Dolphins 9%
- C Sharks 10%
- D Tropical Fish 52%

a. The number of sea horses is about how many times the number of sharks?

b. If there are 84 animals at the aquarium, how many fewer dolphins are there than sea horses?

2.

Books Read Last Year



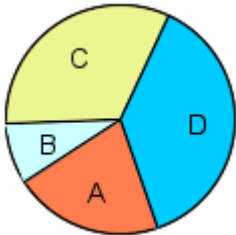
- A 5 books 13%
- B 4 books 15%
- C 3 books 38%
- D 2 books 34%

a. If 331 students were surveyed, how many students read exactly 5 books or exactly 3 books?

b. What fraction of the students read 5 books?

3.

What Students Drank for Breakfast



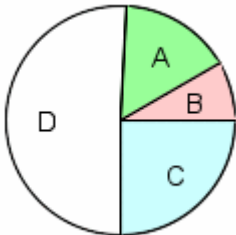
- A Orange Juice 21%
- B Soda 10%
- C Milk 32%
- D Water 37%

a. If the school has 66 students, how many students drank water for breakfast?

b. What is the most popular drink?

4.

How students get to school



- A Walk 15%
- B Bike 9%
- C Drive 26%
- D Take the bus 50%

a. If the school has 66 students, how many students drive to school?

b. What fraction of the students bike to school?
