

Name \_\_\_\_\_




































Date \_\_\_\_\_

## Points, Lines, Rays, and Line Segments

Name each figure using letters and symbols.

Enter answers  
in text boxes.

|   |   |   |
|---|---|---|
| 1.     | 2.     | 3.     |
| 4.     | 5.     | 6.     |
| 7.     | 8.     | 9.     |
| 10.    | 11.    | 12.    |
| 13.    | 14.    | 15.    |
| 16.  | 17.  | 18.  |
| 19.  | 20.  | 21.  |
| 22.  | 23.  | 24.  |
| 25.  | 26.  | 27.  |
| 28.  | 29.  | 30.  |
| 31.  | 32.  | 33.  |