

Name : _____

Score : _____


Teacher : _____

Date : _____

Perpendicular Lines

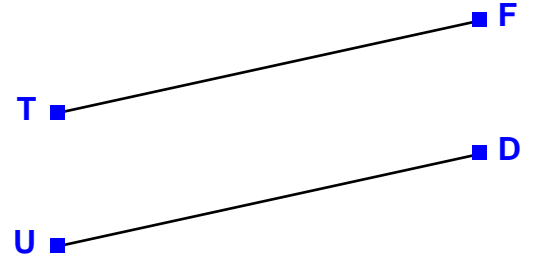
State whether the given pair of lines are perpendicular.

1)



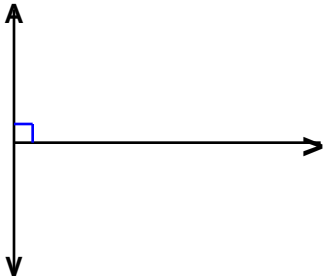
Answer: _____

4)



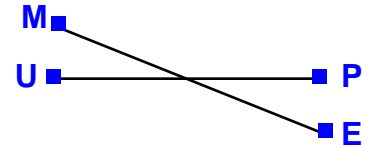
Answer: _____

2)



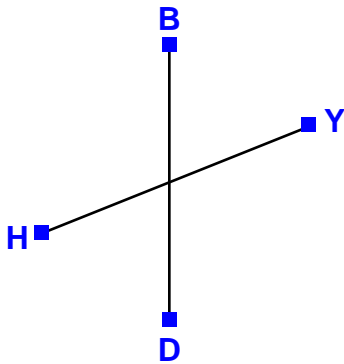
Answer: _____

5)




Answer: _____

3)



Answer: _____

6)



Answer: _____



Name : _____

Score : _____


Teacher : _____

Date : _____

Perpendicular Lines

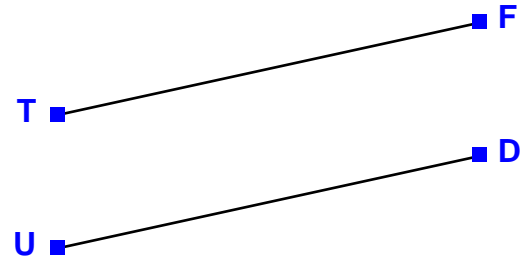
State whether the given pair of lines are perpendicular.

1)



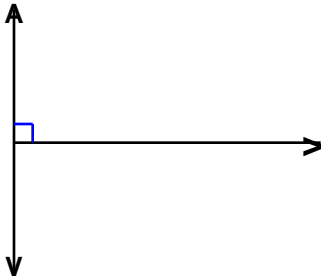
Answer: Not Perpendicular

4)



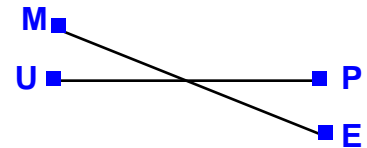
Answer: Not Perpendicular

2)



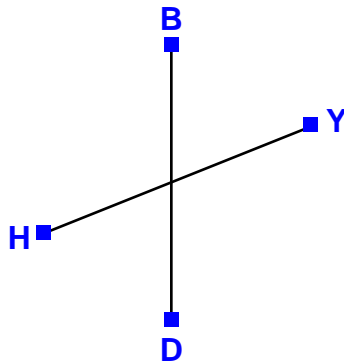
Answer: Perpendicular

5)




Answer: Not Perpendicular

3)



Answer: Not Perpendicular

6)



Answer: Not Perpendicular

