

Name : \_\_\_\_\_

Score : \_\_\_\_\_

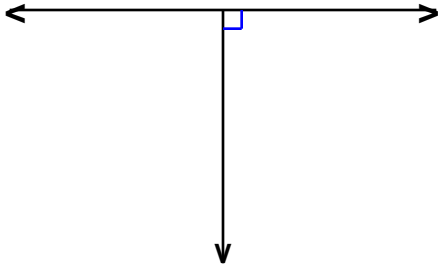
Teacher : \_\_\_\_\_

Date : \_\_\_\_\_

## Parallel Lines

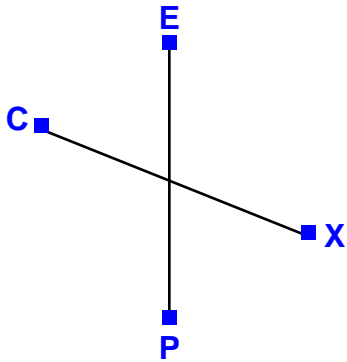
State whether the given pair of lines are parallel.

1)




Answer: \_\_\_\_\_

2)




Answer: \_\_\_\_\_

3)




Answer: \_\_\_\_\_

4)



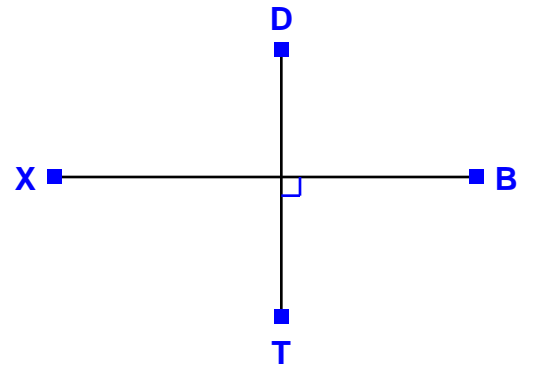
Answer: \_\_\_\_\_

5)



Answer: \_\_\_\_\_

6)



Answer: \_\_\_\_\_



Name : \_\_\_\_\_

Score : \_\_\_\_\_

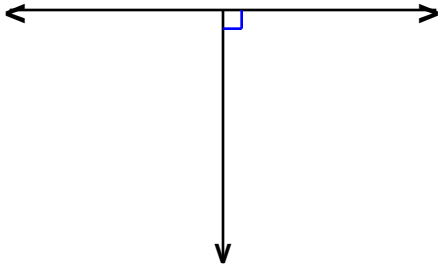
Teacher : \_\_\_\_\_

Date : \_\_\_\_\_

## Parallel Lines


State whether the given pair of lines are parallel.

1)



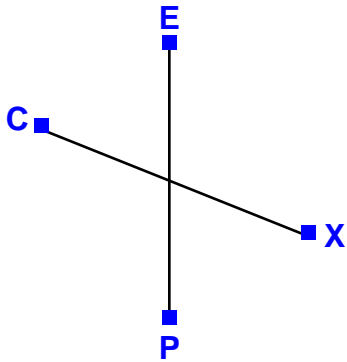
Answer: Not Parallel

4)




Answer: Parallel

2)




Answer: Not Parallel

5)



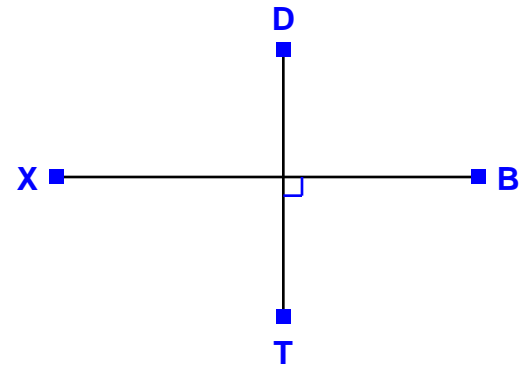
Answer: Parallel

3)



Answer: Parallel

6)



Answer: Not Parallel

