
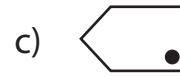
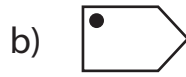
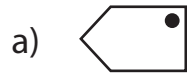



Multiple Choice


Choose the correct image which shows the transformation of each figure.

1) Reflection of  ?




2) Translation of  ?



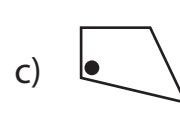
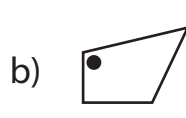
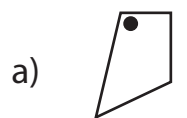
3) Rotation of  ?




4) Reflection of  ?

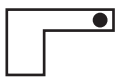


5) Translation of  ?



6) Rotation of  ?



7) Reflection of  ?




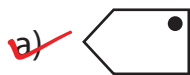


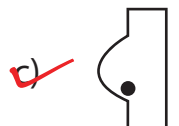


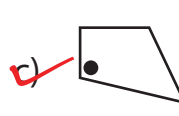
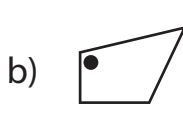


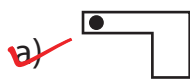
8) Translation of  ?



Answer key**Multiple Choice**

Sheet 1

Choose the correct image which shows the transformation of each figure.

1) Reflection of  ?2) Translation of  ?3) Rotation of  ?4) Reflection of  ?5) Translation of  ?6) Rotation of  ?7) Reflection of  ?8) Translation of  ?