

Name \_\_\_\_\_

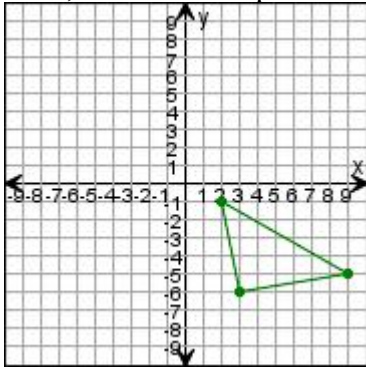


Date \_\_\_\_\_

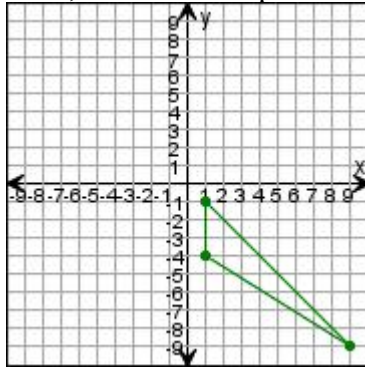
# Transformations

Draw the triangle after the transformations.

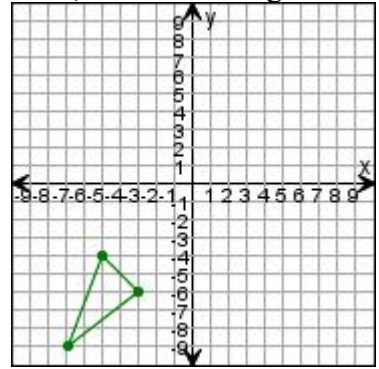
1. Translate the triangle left 7 units, then 5 units up.



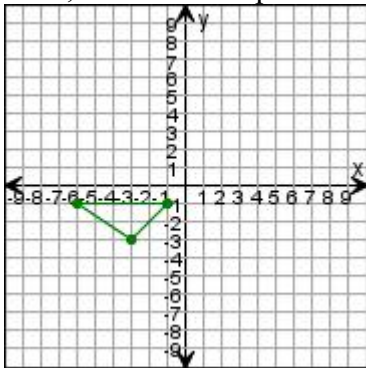
2. Translate the triangle left 5 units, then 4 units up.



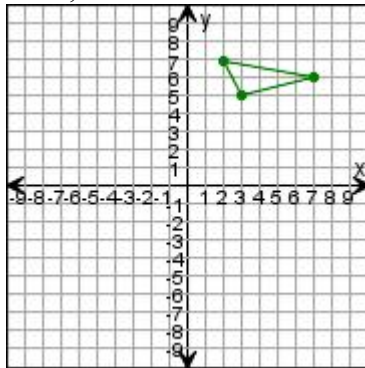
3. Translate the triangle up 9 units, then 3 units right.



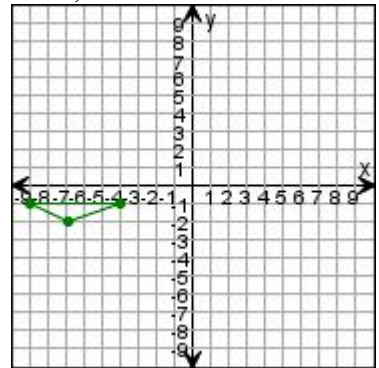
4. Translate the triangle right 7 units, then 9 units up.



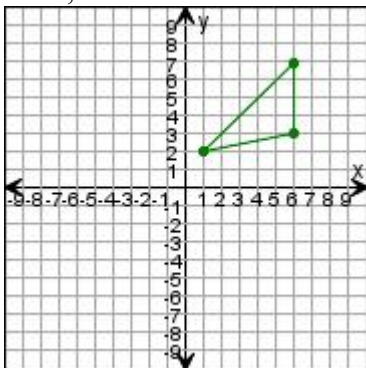
5. Translate the triangle down 7 units, then 8 units left.



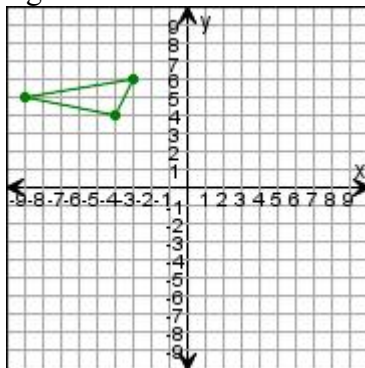
6. Translate the triangle right 5 units, then 7 units down.



7. Translate the triangle left 2 units, then 2 units down.



8. Translate the triangle 1 unit right.



9. Translate the triangle right 4 units, then 1 unit up.

