

Name _____

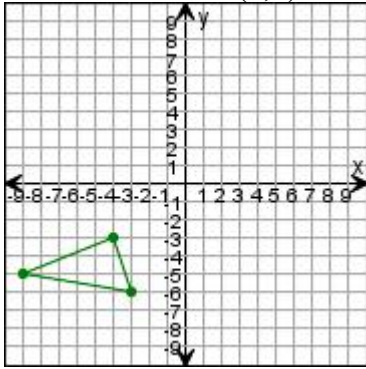


Date _____

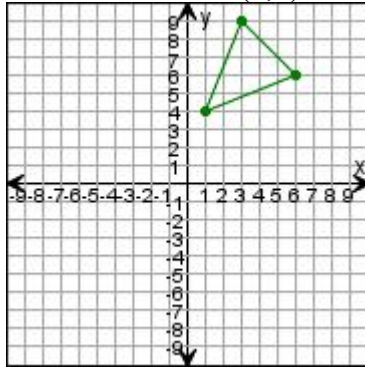
Transformations

Draw the triangle after the transformations.

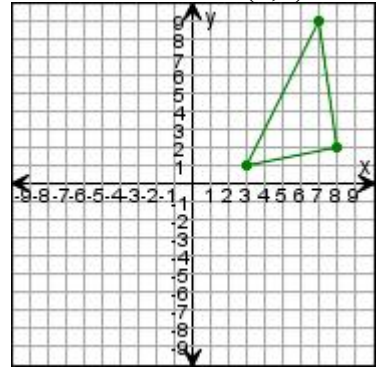
1. Rotate the triangle 180° clockwise around $(0,0)$.



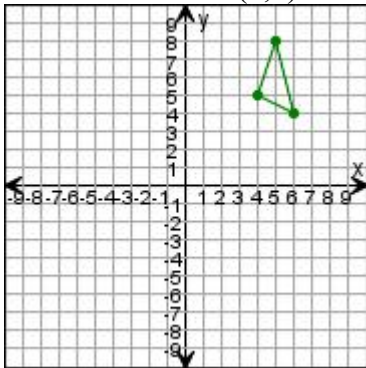
2. Rotate the triangle 180° clockwise around $(0,0)$.



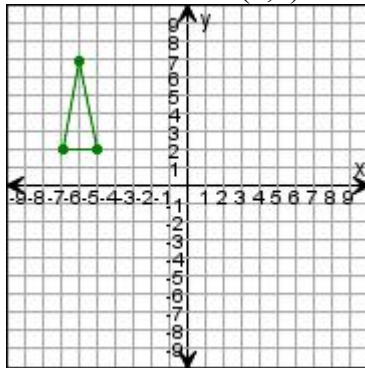
3. Rotate the triangle 90° clockwise around $(0,0)$.



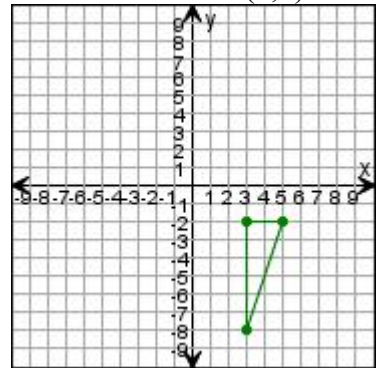
4. Rotate the triangle 270° clockwise around $(0,0)$.



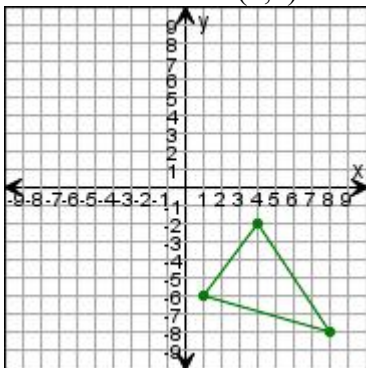
5. Rotate the triangle 270° clockwise around $(0,0)$.



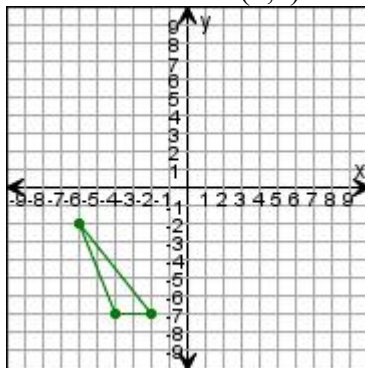
6. Rotate the triangle 90° clockwise around $(0,0)$.



7. Rotate the triangle 90° clockwise around $(0,0)$.



8. Rotate the triangle 180° clockwise around $(0,0)$.



9. Rotate the triangle 90° clockwise around $(0,0)$.

