

Name \_\_\_\_\_

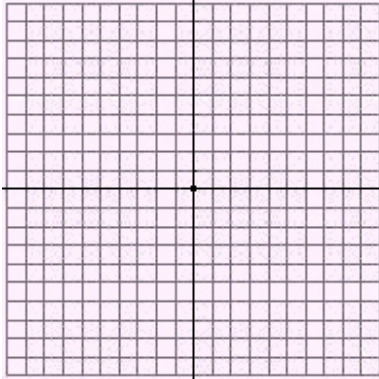


Date \_\_\_\_\_


## Linear Equations

Graph each equation. State the ordered pairs for the x-intercept (the point where the graph crosses the x-axis) and state the order pair for the y-intercept (the point where the graph crosses the y-axis).

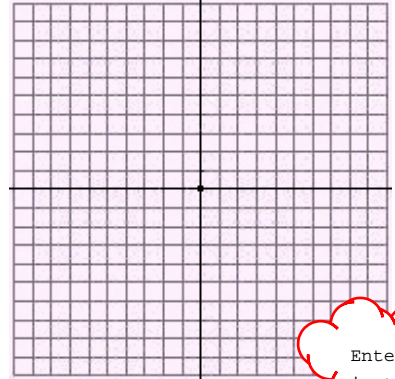
1.  $3x + y = -4$



2.  $-6x = 16 - 2y$

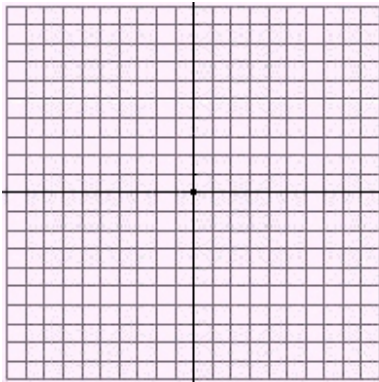


3.  $y = 5$




Enter answers  
in text boxes.

4.  $y = -2x - 6$



5.  $y = x + 5$



6.  $4x - y = -3$

