

Name : _____

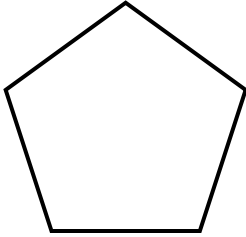
Score : _____

Teacher : _____

Date : _____

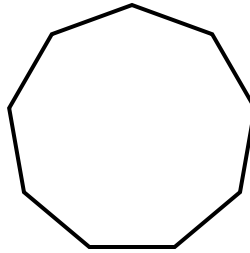
Identify the Type For Each Regular Polygon.

1)



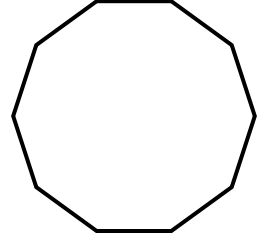
Type: _____

2)



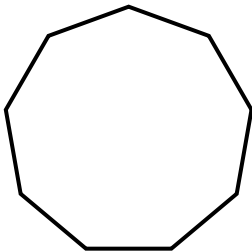
Type: _____

3)



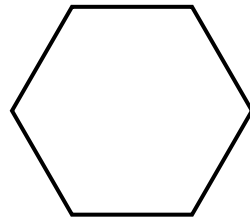
Type: _____

4)



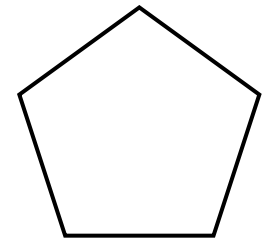
Type: _____

5)



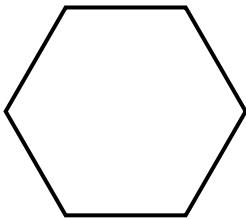
Type: _____

6)



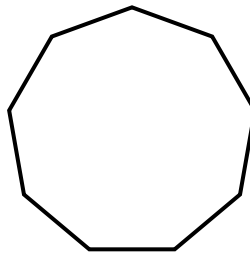
Type: _____

7)



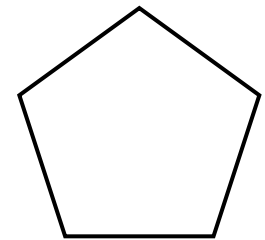
Type: _____

8)



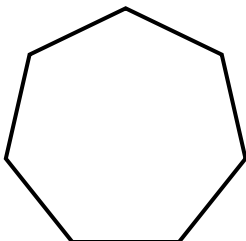
Type: _____

9)



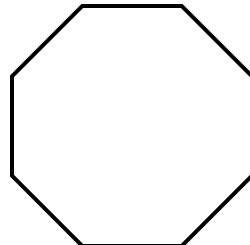
Type: _____

10)



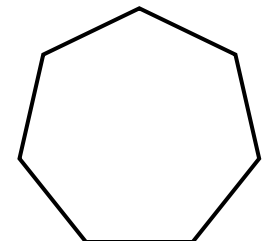
Type: _____

11)



Type: _____

12)



Type: _____



Name : _____

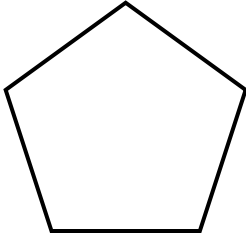
Score : _____

Teacher : _____

Date : _____

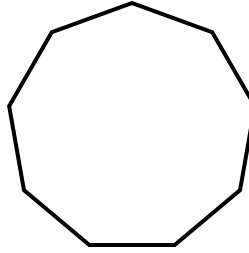
Identify the Type For Each Regular Polygon.

1)



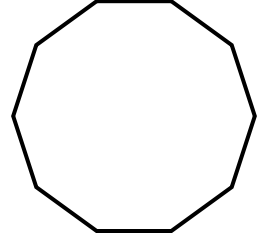
Type: Pentagon

2)



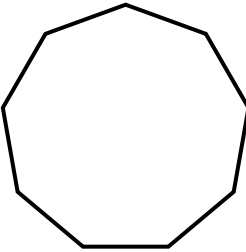
Type: Nonagon

3)



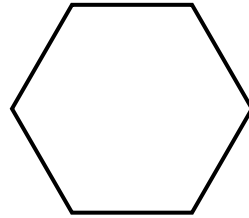
Type: Decagon

4)



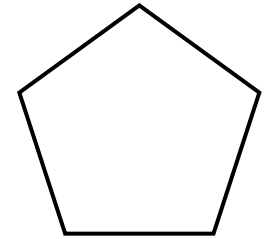
Type: Nonagon

5)



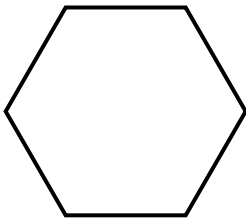
Type: Hexagon

6)



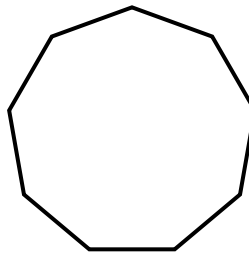
Type: Pentagon

7)



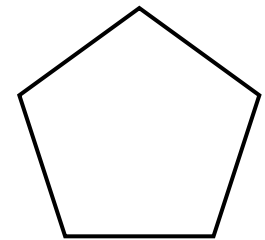
Type: Hexagon

8)



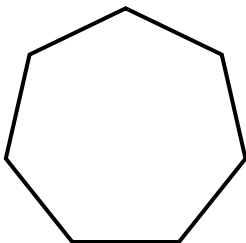
Type: Nonagon

9)



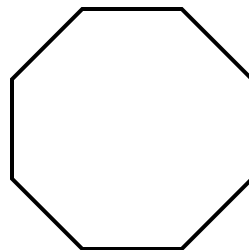
Type: Pentagon

10)



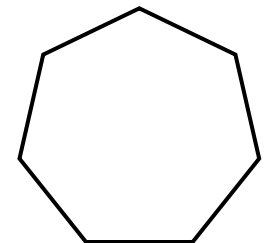
Type: Heptagon

11)



Type: Octagon

12)



Type: Heptagon

