

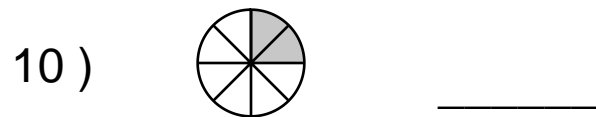
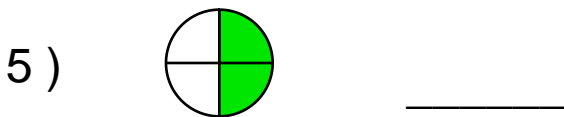
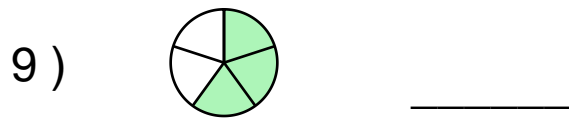
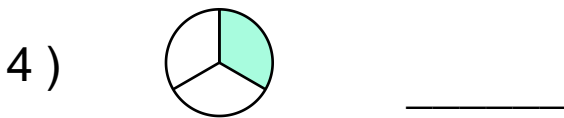
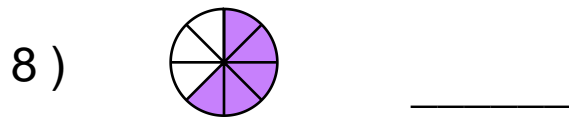
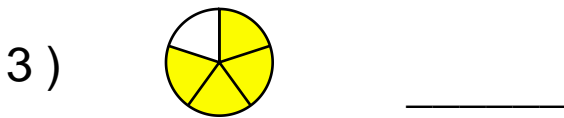
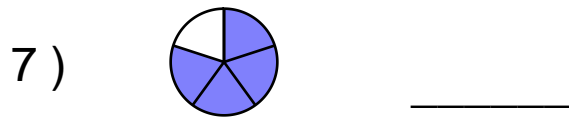
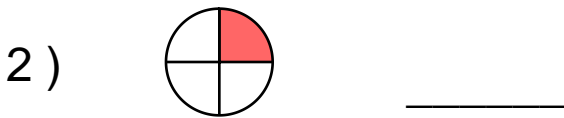
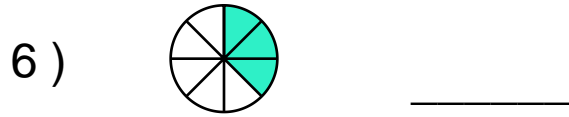
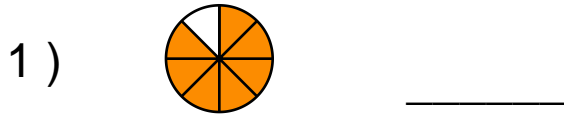
Name : \_\_\_\_\_

Score : \_\_\_\_\_

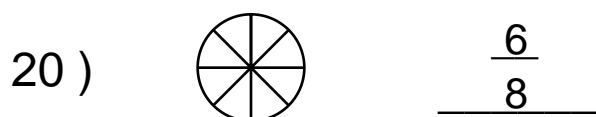
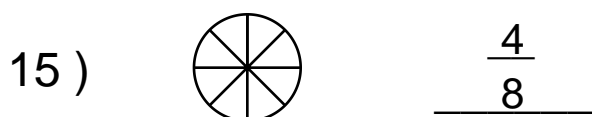
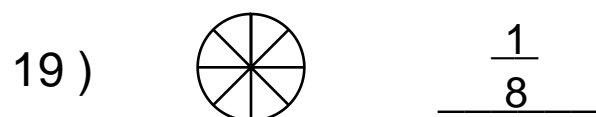
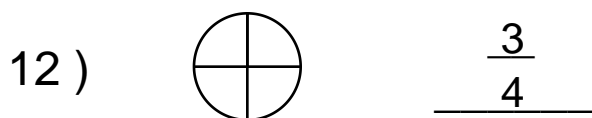
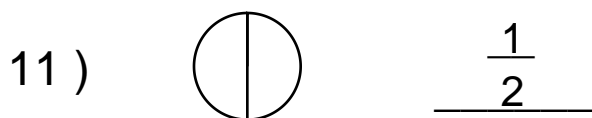
Teacher : \_\_\_\_\_

Date : \_\_\_\_\_

What is the Fraction of the Shaded Area ?



Shade the Figure with the Indicated Fraction.



Name : \_\_\_\_\_

Score : \_\_\_\_\_


Teacher : \_\_\_\_\_

Date : \_\_\_\_\_

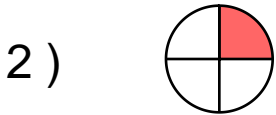
What is the Fraction of the Shaded Area ?



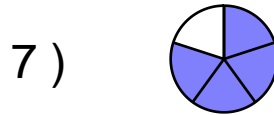
$\frac{7}{8}$



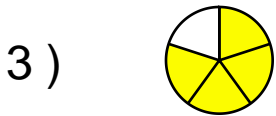
$\frac{3}{8}$



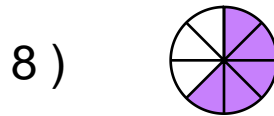
$\frac{1}{4}$



$\frac{4}{5}$



$\frac{4}{5}$



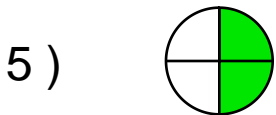
$\frac{5}{8}$



$\frac{1}{3}$



$\frac{3}{5}$



$\frac{2}{4}$



$\frac{2}{8}$

Shade the Figure with the Indicated Fraction.



$\frac{1}{2}$



$\frac{2}{3}$



$\frac{3}{4}$



$\frac{1}{5}$



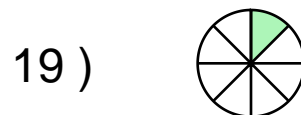
$\frac{3}{5}$



$\frac{2}{5}$



$\frac{2}{5}$



$\frac{1}{8}$



$\frac{4}{8}$



$\frac{6}{8}$