

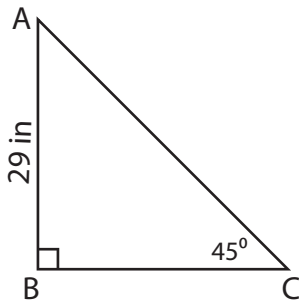
Name : _____

Missing Sides

Sheet 1

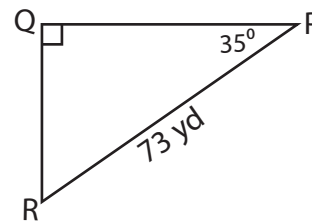
Find the measure of each indicated side. Round the answer to the nearest tenth.

1)



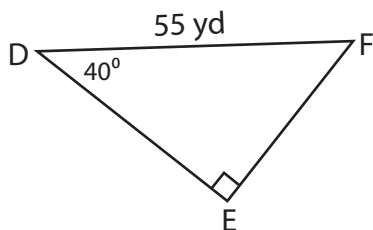
AC = _____

2)



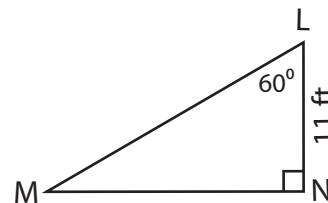
QP = _____

3)



EF = _____

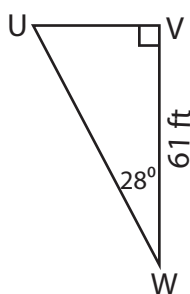
4)



MN = _____

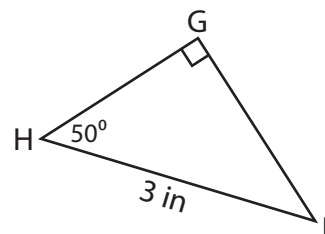
Find the perimeter of each triangle.

5)



Perimeter = _____

6)



Perimeter = _____

Name : _____

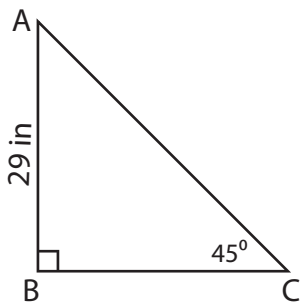
Answer key

Missing Sides

Sheet 1

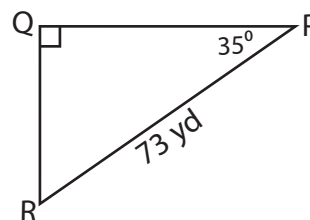
Find the measure of each indicated side. Round the answer to the nearest tenth.

1)



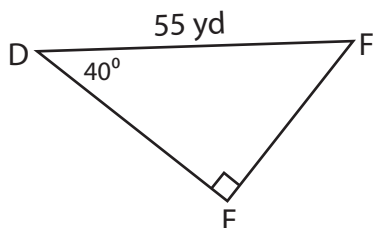
AC = 41 in

2)



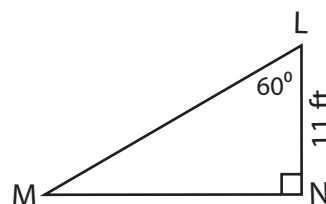
QP = 59.8 yd

3)



EF = 35.4

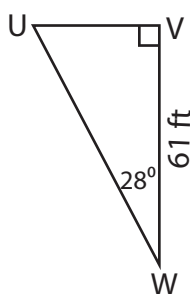
4)



MN = 19.1 ft

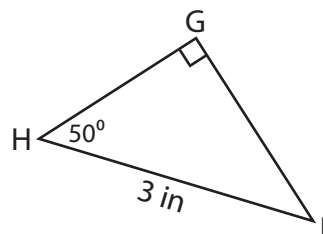
Find the perimeter of each triangle.

5)



Perimeter = 162.6 ft

6)



Perimeter = 7.2 in